

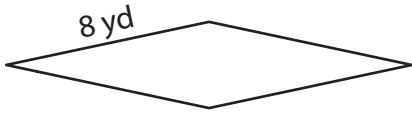
Name : _____

Perimeter of a Rhombus

L155

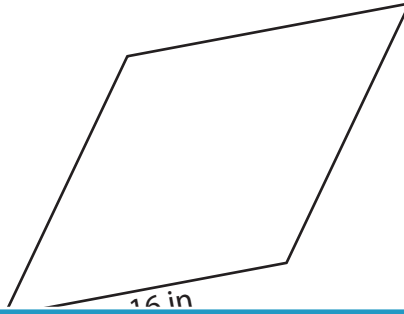
Find the perimeter of each rhombus.

1)



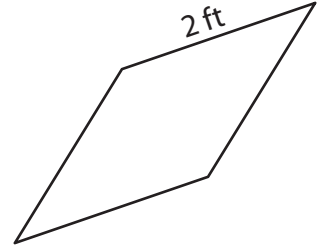
Perimeter = _____

2)

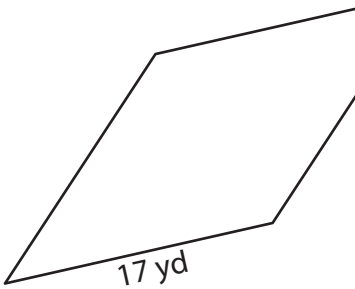


Perimeter = _____

3)



4)



Perimeter = _____

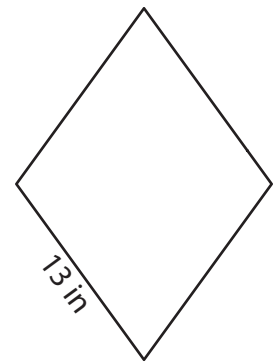
PREVIEW

Gain complete access to the largest collection of worksheets in all subjects!

Members, please log in to download this worksheet.

Not a member? Please sign up to gain complete access.

www.mathworksheets4kids.com



Perimeter = _____

7) What is the perimeter of

8) The side length of a rhombus is 19 feet. Determine its perimeter.

Name : _____

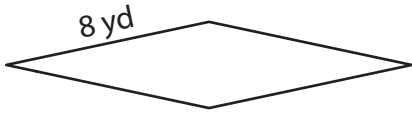
Answer key

Perimeter of a Rhombus

L155

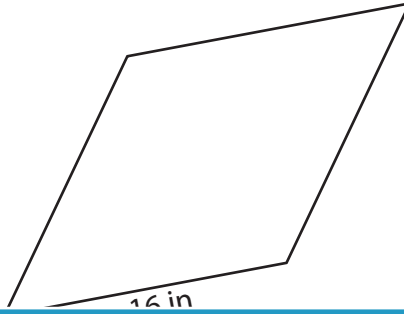
Find the perimeter of each rhombus.

1)

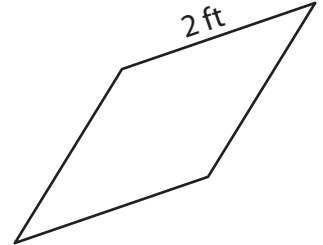


Perimeter = 32 yd

2)

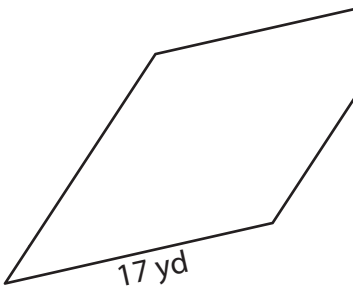


3)



Perimeter = 8 ft

4)



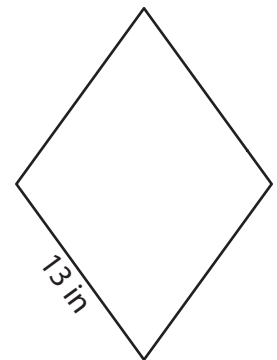
Perimeter = 68 yd

Gain complete access to the largest collection of worksheets in all subjects!

Members, please log in to download this worksheet.

Not a member? Please sign up to gain complete access.

www.mathworksheets4kids.com



Perimeter = 52 in

7) What is the perimeter of

12 yards

8) The side length of a rhombus is 19 feet. Determine its perimeter.

76 feet