

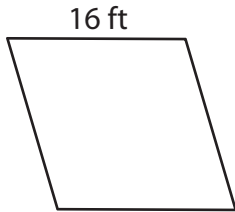
Name : _____

L2S1

Perimeter of a Rhombus

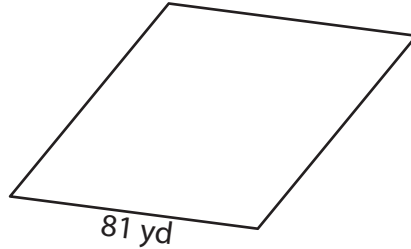
Find the perimeter of each rhombus.

1)



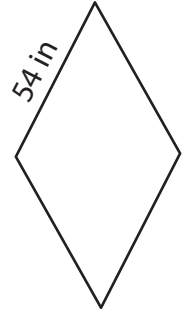
Perimeter = _____

2)

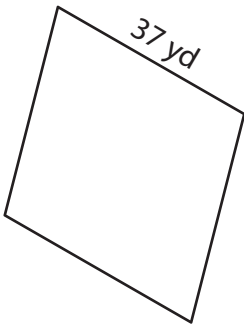


Perimeter = _____

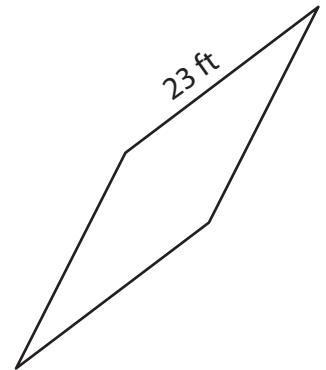
3)



4)



Perimeter = _____



Perimeter = _____

7) What is the perimeter of

8) Determine the perimeter of the rhombus, if its side length is 43 yards.

PREVIEW

Gain complete access to the largest collection of worksheets in all subjects!

Members, please log in to download this worksheet.

Not a member? Please sign up to gain complete access.

www.mathworksheets4kids.com

Name : _____

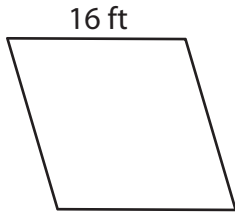
Answer key

L2S1

Perimeter of a Rhombus

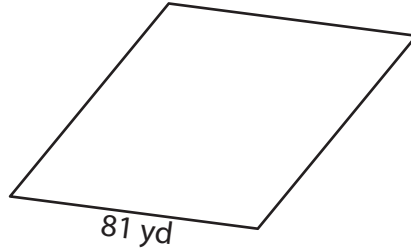
Find the perimeter of each rhombus.

1)



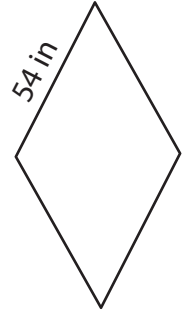
Perimeter = 64 ft

2)

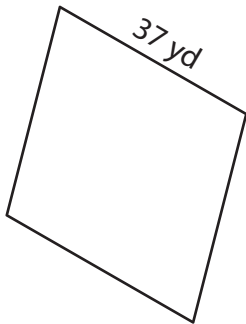


Perimeter = 216 in

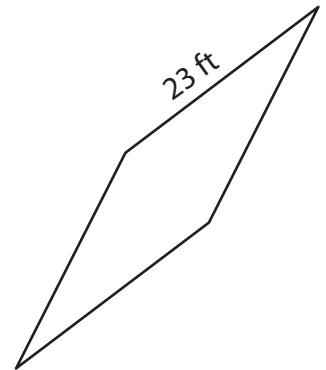
3)



4)



Perimeter = 148 yd



Perimeter = 92 ft

7) What is the perimeter of

296 feet

8) Determine the perimeter of the rhombus, if its side length is 43 yards.

172 yards

PREVIEW

Gain complete access to the largest collection of worksheets in all subjects!

Members, please log in to download this worksheet.

Not a member? Please sign up to gain complete access.

www.mathworksheets4kids.com