

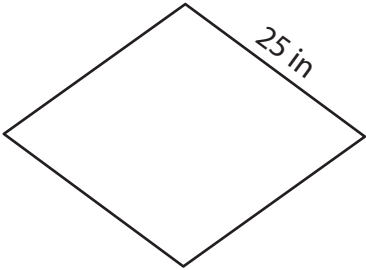
Name : _____

Perimeter of a Rhombus

L2S2

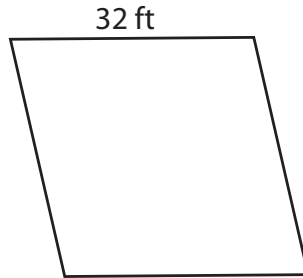
Find the perimeter of each rhombus.

1)

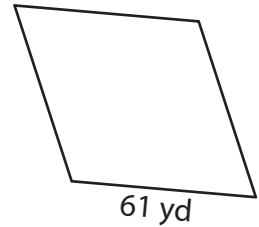


Perimeter = _____

2)

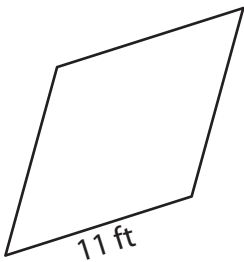


3)



Perimeter = _____

4)



Perimeter = _____

73 in

Perimeter = _____

7) If the length of the side of

of the rhombus.

PREVIEW

Gain complete access to the largest collection of worksheets in all subjects!

Members, please log in to download this worksheet.

Not a member? Please sign up to gain complete access.

www.mathworksheets4kids.com

8) The side of a rhombus measures 87 feet. Calculate the perimeter of the rhombus.

Name : _____

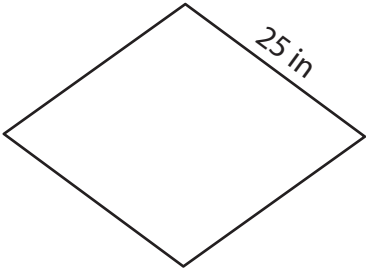
Answer key

Perimeter of a Rhombus

L2S2

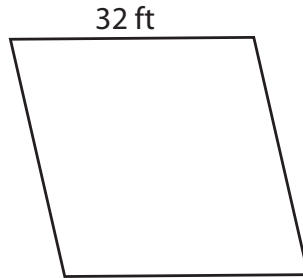
Find the perimeter of each rhombus.

1)



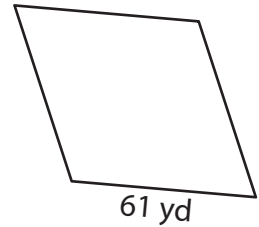
Perimeter = 100 in

2)

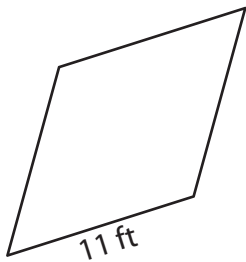


Perimeter = 244 yd

3)



4)



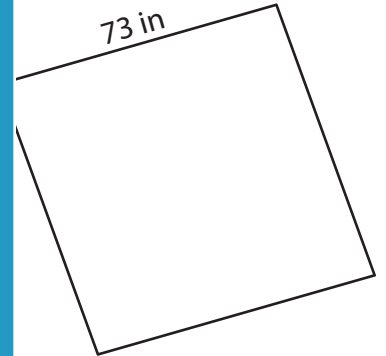
Perimeter = 44 ft

PREVIEW
Gain complete access to the largest collection of worksheets in all subjects!

Members, please log in to download this worksheet.

Not a member? Please sign up to gain complete access.

www.mathworksheets4kids.com



Perimeter = 292 in

7) If the length of the side of

of the rhombus.

220 inches

8) The side of a rhombus measures 87 feet. Calculate the perimeter of the rhombus.

348 feet