

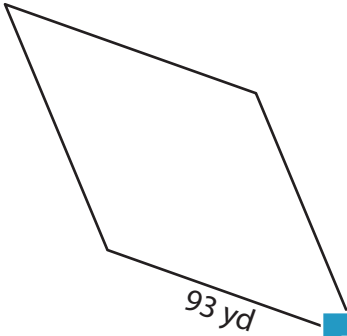
Name : _____

Perimeter of a Rhombus

L2S3

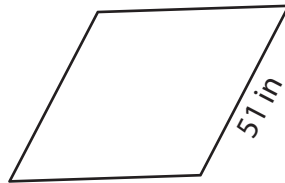
Find the perimeter of each rhombus.

1)

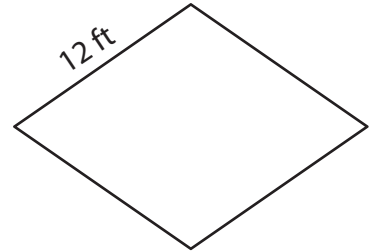


Perimeter = _____

2)

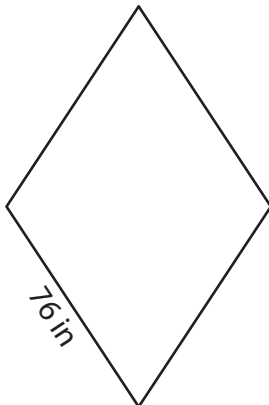


3)



Perimeter = _____

4)



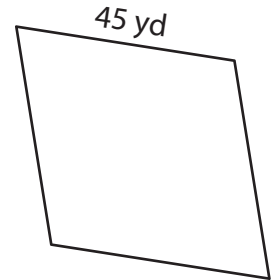
Perimeter = _____

PREVIEW
Gain complete access to the largest collection of worksheets in all subjects!

Members, please log in to download this worksheet.

Not a member? Please sign up to gain complete access.

www.mathworksheets4kids.com



Perimeter = _____

7) Find the perimeter of the

8) The side of a rhombus measures 68 yards. What is the perimeter of the rhombus?

Name : _____

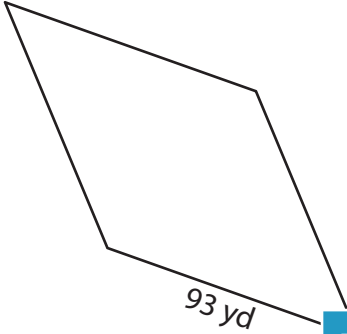
Answer key

L2S3

Perimeter of a Rhombus

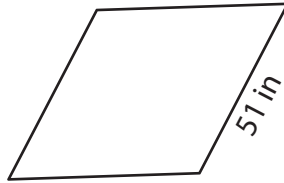
Find the perimeter of each rhombus.

1)

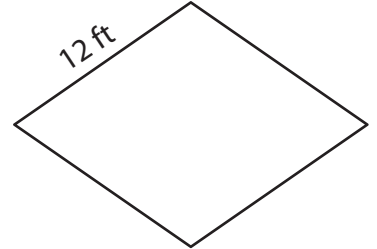


Perimeter = 372 yd

2)

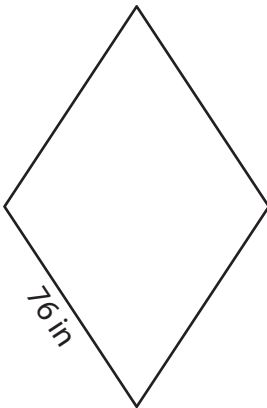


3)



Perimeter = 48 ft

4)



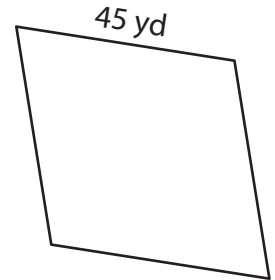
Perimeter = 304 in

Gain complete access to the largest collection of worksheets in all subjects!

Members, please log in to download this worksheet.

Not a member? Please sign up to gain complete access.

www.mathworksheets4kids.com



Perimeter = 180 yd

7) Find the perimeter of the

116 inches

8) The side of a rhombus measures 68 yards. What is the perimeter of the rhombus?

272 yards