

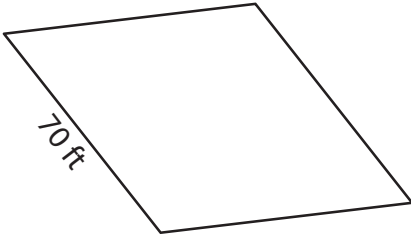
Name : _____

Perimeter of a Rhombus

L2S4

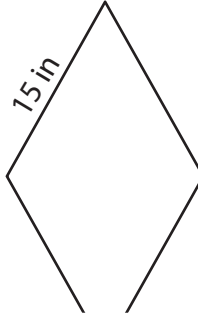
Find the perimeter of each rhombus.

1)




Perimeter = _____

2)

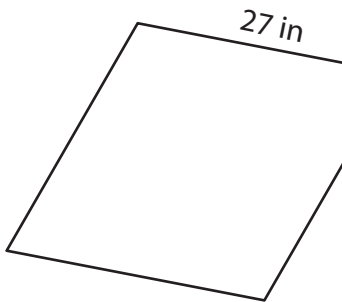


Perimeter = _____

3)



4)



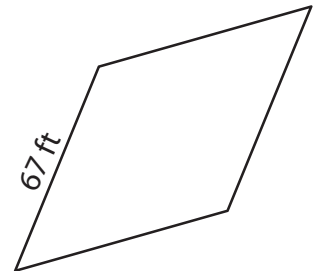
Perimeter = _____

PREVIEW
Gain complete access to the largest
collection of worksheets in all subjects!

Members, please
log in to
download this
worksheet.

Not a member?
Please sign up to
gain complete
access.

www.mathworksheets4kids.com



Perimeter = _____

7) Determine the perimeter

8) The length of the side of a rhombus is 36 feet. Find its perimeter.

Name : _____

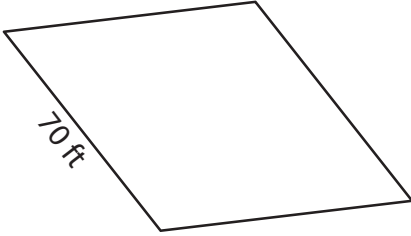
Answer key

L2S4

Perimeter of a Rhombus

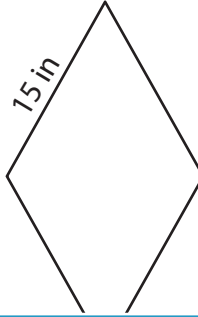
Find the perimeter of each rhombus.

1)



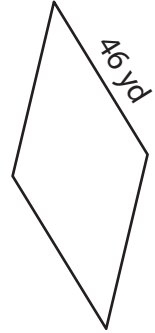
Perimeter = 280 ft

2)

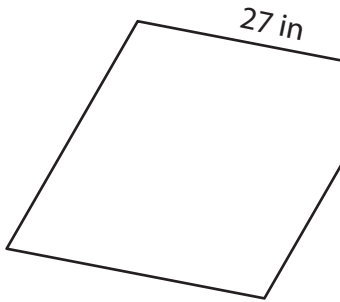


Perimeter = 184 yd

3)

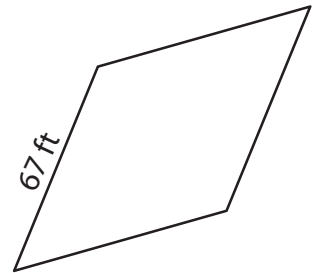


4)



Perimeter = 108 in

7) Determine the perimeter



Perimeter = 268 ft

368 yards

8) The length of the side of a rhombus is 36 feet. Find its perimeter.

144 feet

PREVIEW

Gain complete access to the largest collection of worksheets in all subjects!

Members, please log in to download this worksheet.

Not a member? Please sign up to gain complete access.

www.mathworksheets4kids.com