

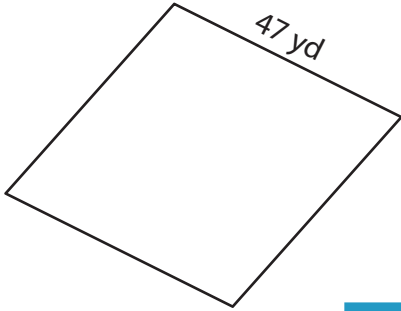
Name : _____

Perimeter of a Rhombus

L2S5

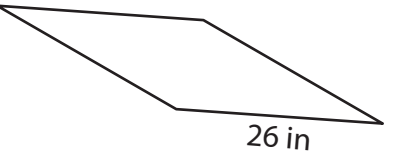
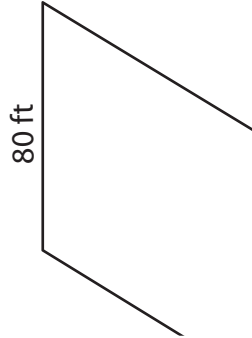
Find the perimeter of each rhombus.

1)



Perimeter = _____

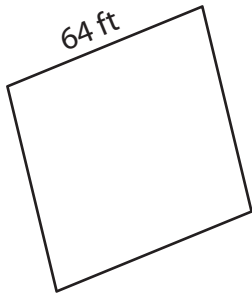
2)



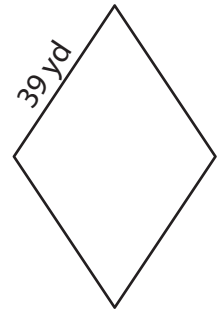
3)

Perimeter = _____

4)



Perimeter = _____



Perimeter = _____

7) If the side length of a rhombus is 15 cm, find its perimeter.

Perimeter = _____

8) The side length of a rhombus is 52 inches. Determine its perimeter.

PREVIEW

Gain complete access to the largest collection of worksheets in all subjects!

Members, please log in to download this worksheet.

Not a member? Please sign up to gain complete access.

www.mathworksheets4kids.com

Name : _____

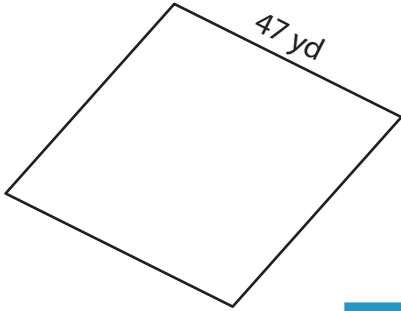
Answer key

Perimeter of a Rhombus

L2S5

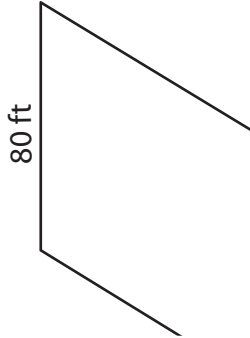
Find the perimeter of each rhombus.

1)

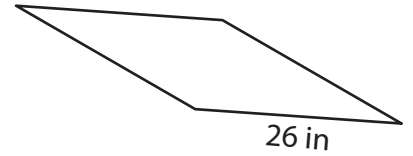


Perimeter = 188 yd

2)

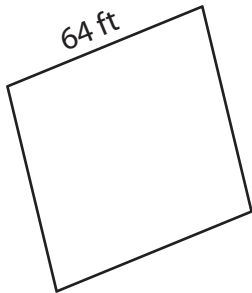


3)



Perimeter = 104 in

4)



Perimeter = 256 ft

7) If the side length of a rhombus is

rhombus.

72 yards

8) The side length of a rhombus is 52 inches. Determine its perimeter.

208 inches

PREVIEW

Gain complete access to the largest collection of worksheets in all subjects!

Members, please log in to download this worksheet.

Not a member? Please sign up to gain complete access.

www.mathworksheets4kids.com