


Name : \_\_\_\_\_

# Perimeter of a Rhombus

Sheet 1

Find the side length each rhombus.

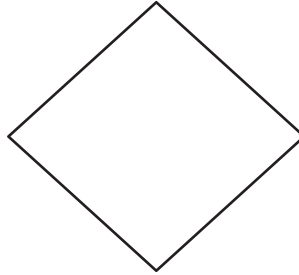
1)



Perimeter = 60 in

side length = \_\_\_\_\_

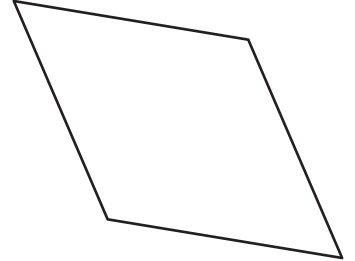
2)



Perimeter = 184 yd

side length = \_\_\_\_\_

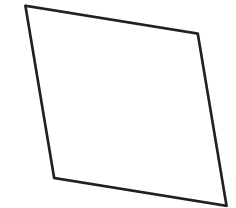
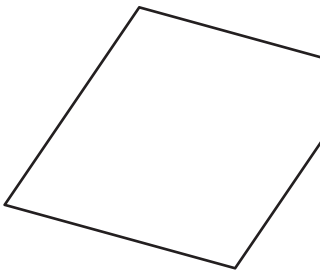
3)



Perimeter = 132 ft

side length = \_\_\_\_\_

4)



Perimeter = 32 in

side length = \_\_\_\_\_

7) The perimeter of a rhombus is 120 inches.

Find the side length of the rhombus.

\_\_\_\_\_

8) If the perimeter of a rhombus is 120 inches, find the side length of the rhombus.

\_\_\_\_\_

**PREVIEW**

Gain complete access to the largest collection of worksheets in all subjects!

Members, please log in to download this worksheet.


Not a member? Please sign up to gain complete access.

[www.mathworksheets4kids.com](http://www.mathworksheets4kids.com)

**Perimeter of a Rhombus**

Find the side length each rhombus.

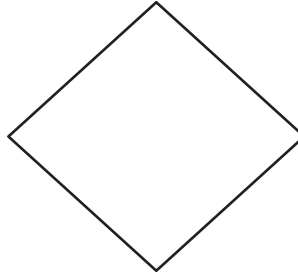
1)



Perimeter = 60 in

side length = 15 in

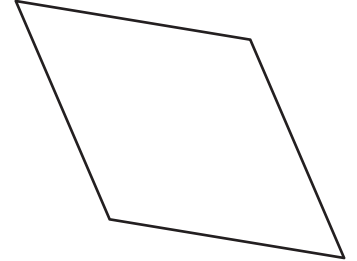
2)



Perimeter = 184 yd

side length = 46 yd

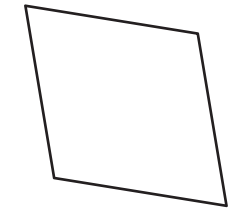
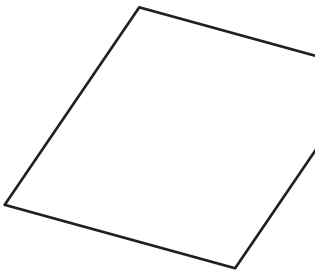
3)



Perimeter = 132 ft

side length = 33 ft

4)



Perimeter = 32 in

side length = 8 in

7) The perimeter of a rhombus is 10 yards.

10 yards

8) If the perimeter of a rhombus is 120 inches, find the side length of the rhombus.

30 inches

**PREVIEW**

Gain complete access to the largest collection of worksheets in all subjects!

Members, please log in to download this worksheet.

Not a member? Please sign up to gain complete access.

[www.mathworksheets4kids.com](http://www.mathworksheets4kids.com)