

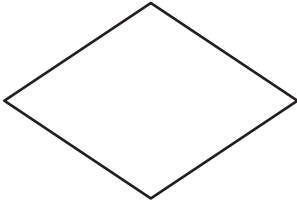
Name : \_\_\_\_\_

# Perimeter of a Rhombus

Sheet 3

Find the side length each rhombus.

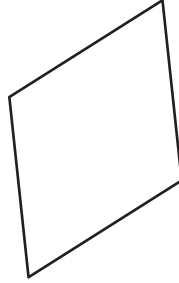
1)



Perimeter = 16 yd

side length = \_\_\_\_\_

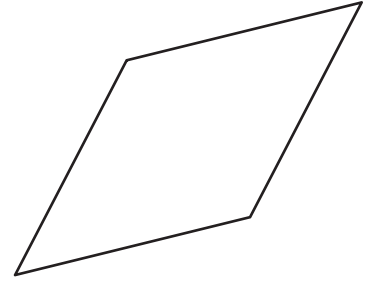
2)



Perimeter = 172 ft

side length = \_\_\_\_\_

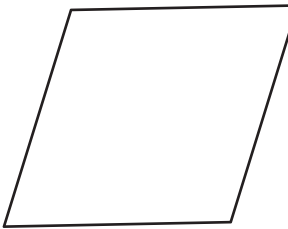
3)



Perimeter = 72 in

side length = \_\_\_\_\_

4)



Perimeter = 112 yd

side length = \_\_\_\_\_

7) Determine the side length of a rhombus if its perimeter is 88 yards.

\_\_\_\_\_

8) If the perimeter of a rhombus is 88 yards, calculate the side length of the rhombus.

\_\_\_\_\_

**PREVIEW**

Gain complete access to the largest collection of worksheets in all subjects!

Members, please log in to download this worksheet.

Not a member? Please sign up to gain complete access.

[www.mathworksheets4kids.com](http://www.mathworksheets4kids.com)