

Name : \_\_\_\_\_

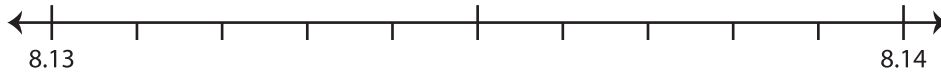
## Rounding to Nearest Hundredth

Sheet 1

Use the number line to answer the questions.

1) 8.137

i) Mark 8.137 on the number line.



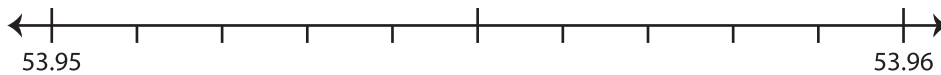
ii) Which decimal is closer to 8.137? a) 8.14 b) 8.13

iii) Round 8.137 to the nearest hundredth. \_\_\_\_\_

iv) Did you round up or round down? \_\_\_\_\_

2) 53.954

i) Mark 53.954 on the number line.



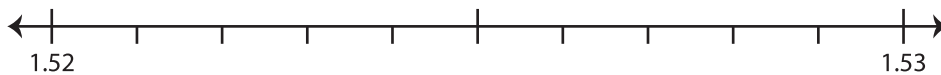
ii) Which decimal is closer to 53.954? a) 53.96 b) 53.95

iii) Round 53.954 to the nearest hundredth. \_\_\_\_\_

iv) Did you round up or round down? \_\_\_\_\_

3) 1.523

i) Mark 1.523 on the number line.



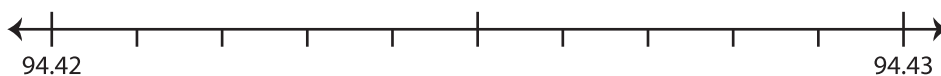
ii) Which decimal is closer to 1.523? a) 1.52 b) 1.53

iii) Round 1.523 to the nearest hundredth. \_\_\_\_\_

iv) Did you round up or round down? \_\_\_\_\_

4) 94.428

i) Mark 94.428 on the number line.



ii) Which decimal is closer to 94.428? a) 94.42 b) 94.43

iii) Round 94.428 to the nearest hundredth. \_\_\_\_\_

iv) Did you round up or round down? \_\_\_\_\_