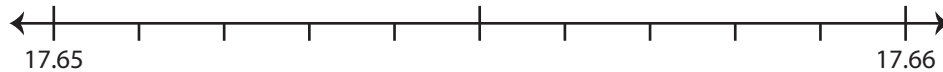


Rounding to Nearest Hundredth

Use the number line to answer the questions.

1) 17.651

i) Mark 17.651 on the number line.



ii) Which decimal is closer to 17.651? a) 17.66 b) 17.65

iii) Round 17.651 to the nearest hundredth. _____

iv) Did you round up or round down? _____

2) 6.294

i) Mark 6.29



ii) Which decimal is closer to 6.294? a) 6.29 b) 6.3

iii) Round 6.294 to the nearest hundredth. _____

iv) Did you round up or round down? _____

3) 26.356

i) Mark 26.35



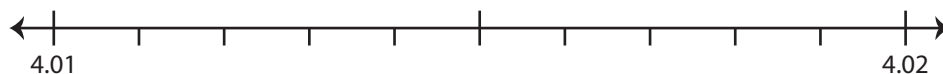
ii) Which decimal is closer to 26.356? a) 26.35 b) 26.36

iii) Round 26.356 to the nearest hundredth. _____

iv) Did you round up or round down? _____

4) 4.019

i) Mark 4.019 on the number line.



ii) Which decimal is closer to 4.019? a) 4.02 b) 4.01

iii) Round 4.019 to the nearest hundredth. _____

iv) Did you round up or round down? _____

PREVIEW

Gain complete access to the largest
collection of worksheets in all subjects!

Members, please
log in to
download this
worksheet.

Not a member?
Please sign up to
gain complete
access.

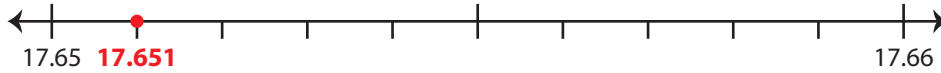
www.mathworksheets4kids.com

Rounding to Nearest Hundredth

Use the number line to answer the questions.

1) 17.651

i) Mark 17.651 on the number line.

ii) Which decimal is closer to 17.651? a) 17.66 b) 17.65iii) Round 17.651 to the nearest hundredth. 17.65iv) Did you round up or round down? round down

2) 6.294

i) Mark 6.294 on the number line.

ii) Which decimal is closer to 6.294? a) 6.3 b) 6.29iii) Round 6.294 to the nearest hundredth. 6.29iv) Did you round up or round down? round down

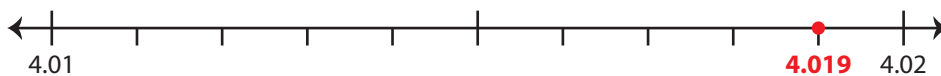
3) 26.356

i) Mark 26.356 on the number line.

ii) Which decimal is closer to 26.356? a) 26.35 b) 26.36 iii) Round 26.356 to the nearest hundredth. 26.36iv) Did you round up or round down? round up

4) 4.019

i) Mark 4.019 on the number line.

ii) Which decimal is closer to 4.019? a) 4.02 b) 4.01 iii) Round 4.019 to the nearest hundredth. 4.02iv) Did you round up or round down? round up

PREVIEW

Gain complete access to the largest collection of worksheets in all subjects!

Members, please log in to download this worksheet.

Not a member? Please sign up to gain complete access.

www.mathworksheets4kids.com