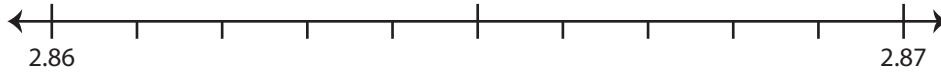


## Rounding to Nearest Hundredth

Use the number line to answer the questions.

1) 2.863

i) Mark 2.863 on the number line.



ii) Which decimal is closer to 2.863? a) 2.86 b) 2.87

iii) Round 2.863 to the nearest hundredth. \_\_\_\_\_

iv) Did you round up or round down? \_\_\_\_\_

2) 9.706

i) Mark 9.706 on the number line.



ii) Which decimal is closer to 9.706? a) 9.7 b) 9.71

iii) Round 9.706 to the nearest hundredth. \_\_\_\_\_

iv) Did you round up or round down? \_\_\_\_\_

3) 75.117

i) Mark 75.117 on the number line.



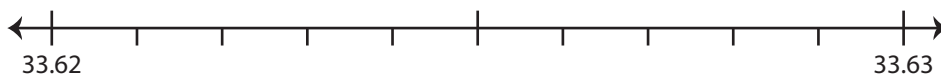
ii) Which decimal is closer to 75.117? a) 75.11 b) 75.12

iii) Round 75.117 to the nearest hundredth. \_\_\_\_\_

iv) Did you round up or round down? \_\_\_\_\_

4) 33.622

i) Mark 33.622 on the number line.



ii) Which decimal is closer to 33.622? a) 33.63 b) 33.62

iii) Round 33.622 to the nearest hundredth. \_\_\_\_\_

iv) Did you round up or round down? \_\_\_\_\_

# PREVIEW

Gain complete access to the largest  
collection of worksheets in all subjects!

Members, please  
log in to  
download this  
worksheet.

Not a member?  
Please sign up to  
gain complete  
access.

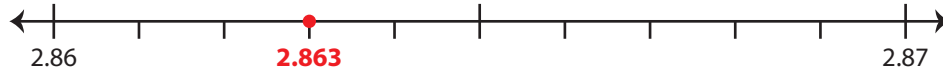
[www.mathworksheets4kids.com](http://www.mathworksheets4kids.com)

**Rounding to Nearest Hundredth**

Use the number line to answer the questions.

1) 2.863

i) Mark 2.863 on the number line.

ii) Which decimal is closer to 2.863?  a) 2.86    b) 2.87iii) Round 2.863 to the nearest hundredth.    2.86iv) Did you round up or round down?    round down

2) 9.706

i) Mark 9.706 on the number line.

ii) Which decimal is closer to 9.706?     a) 9.7     b) 9.71iii) Round 9.706 to the nearest hundredth.    9.71iv) Did you round up or round down?    round up

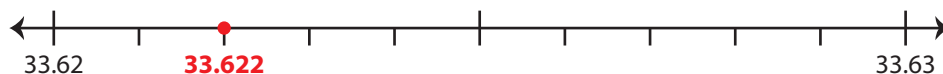
3) 75.117

i) Mark 75.117 on the number line.

ii) Which decimal is closer to 75.117?     a) 75.11     b) 75.12iii) Round 75.117 to the nearest hundredth.    75.12iv) Did you round up or round down?    round up

4) 33.622

i) Mark 33.622 on the number line.

ii) Which decimal is closer to 33.622?    a) 33.63     b) 33.62iii) Round 33.622 to the nearest hundredth.    33.62iv) Did you round up or round down?    round down

**PREVIEW**

Gain complete access to the largest collection of worksheets in all subjects!

Members, please log in to download this worksheet.

Not a member? Please sign up to gain complete access.

[www.mathworksheets4kids.com](http://www.mathworksheets4kids.com)