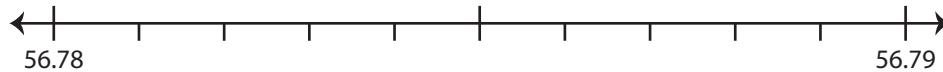


Rounding to Nearest Hundredth

Use the number line to answer the questions.

1) 56.789

i) Mark 56.789 on the number line.



ii) Which decimal is closer to 56.789? a) 56.78 b) 56.79

iii) Round 56.789 to the nearest hundredth. _____

iv) Did you round up or round down? _____

2) 81.218

i) Mark 81.218 on the number line.



ii) Which decimal is closer to 81.218? a) 81.21 b) 81.22

iii) Round 81.218 to the nearest hundredth. _____

iv) Did you round up or round down? _____

3) 3.982

i) Mark 3.982 on the number line.



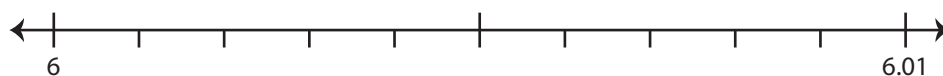
ii) Which decimal is closer to 3.982? a) 3.98 b) 3.99

iii) Round 3.982 to the nearest hundredth. _____

iv) Did you round up or round down? _____

4) 6.004

i) Mark 6.004 on the number line.



ii) Which decimal is closer to 6.004? a) 6.01 b) 6

iii) Round 6.004 to the nearest hundredth. _____

iv) Did you round up or round down? _____

PREVIEW

Gain complete access to the largest
collection of worksheets in all subjects!

Members, please
log in to
download this
worksheet.

Not a member?
Please sign up to
gain complete
access.

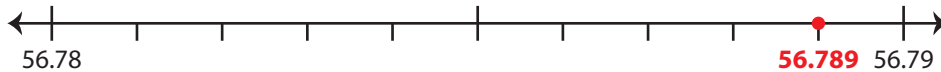
www.mathworksheets4kids.com

Rounding to Nearest Hundredth

Use the number line to answer the questions.

1) 56.789

i) Mark 56.789 on the number line.

ii) Which decimal is closer to 56.789? a) 56.78 b) 56.79iii) Round 56.789 to the nearest hundredth. 56.79iv) Did you round up or round down? round up

2) 81.218

i) Mark 81.218 on the number line.

ii) Which decimal is closer to 81.218? a) 81.21 b) 81.22 iii) Round 81.218 to the nearest hundredth. 81.22iv) Did you round up or round down? round up

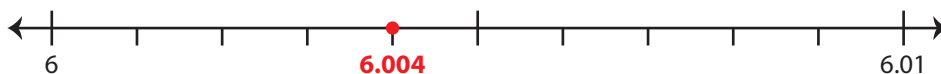
3) 3.982

i) Mark 3.982 on the number line.

ii) Which decimal is closer to 3.982? a) 3.98 b) 3.99 iii) Round 3.982 to the nearest hundredth. 3.98iv) Did you round up or round down? round down

4) 6.004

i) Mark 6.004 on the number line.

ii) Which decimal is closer to 6.004? a) 6.01 b) 6iii) Round 6.004 to the nearest hundredth. 6iv) Did you round up or round down? round down

PREVIEW

Gain complete access to the largest collection of worksheets in all subjects!

Members, please log in to download this worksheet.

Not a member? Please sign up to gain complete access.

www.mathworksheets4kids.com