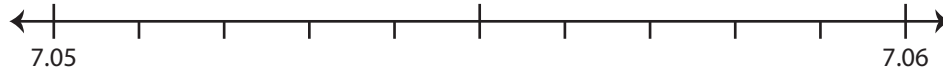


## Rounding to Nearest Hundredth

Use the number line to answer the questions.

1) 7.052

i) Mark 7.052 on the number line.



ii) Which decimal is closer to 7.052?      a) 7.06      b) 7.05

iii) Round 7.052 to the nearest hundredth.      \_\_\_\_\_

iv) Did you round up or round down?      \_\_\_\_\_

2) 49.963

i) Mark 49.963 on the number line.



ii) Which decimal is closer to 49.963?      a) 49.96      b) 49.97

iii) Round 49.963 to the nearest hundredth.      \_\_\_\_\_

iv) Did you round up or round down?      \_\_\_\_\_

3) 62.869

i) Mark 62.869 on the number line.



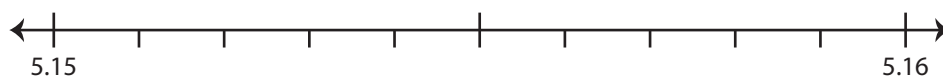
ii) Which decimal is closer to 62.869?      a) 62.86      b) 62.87

iii) Round 62.869 to the nearest hundredth.      \_\_\_\_\_

iv) Did you round up or round down?      \_\_\_\_\_

4) 5.157

i) Mark 5.157 on the number line.



ii) Which decimal is closer to 5.157?      a) 5.16      b) 5.15

iii) Round 5.157 to the nearest hundredth.      \_\_\_\_\_

iv) Did you round up or round down?      \_\_\_\_\_

# PREVIEW

Gain complete access to the largest collection of worksheets in all subjects!

Members, please log in to download this worksheet.

Not a member? Please sign up to gain complete access.

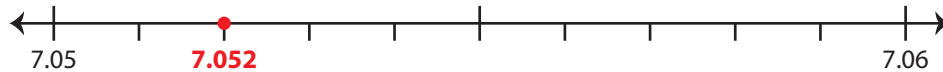
[www.mathworksheets4kids.com](http://www.mathworksheets4kids.com)

**Rounding to Nearest Hundredth**

Use the number line to answer the questions.

1) 7.052

i) Mark 7.052 on the number line.

ii) Which decimal is closer to 7.052? a) 7.06  b)  7.05iii) Round 7.052 to the nearest hundredth. 7.05iv) Did you round up or round down? round down

2) 49.963

i) Mark 49.963 on the number line.

ii) Which decimal is closer to 49.963? a) 49.96  b) 49.97iii) Round 49.963 to the nearest hundredth. 49.96iv) Did you round up or round down? round down

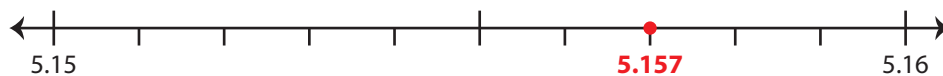
3) 62.869

i) Mark 62.869 on the number line.

ii) Which decimal is closer to 62.869? a) 62.86  b) 62.87iii) Round 62.869 to the nearest hundredth. 62.87iv) Did you round up or round down? round up

4) 5.157

i) Mark 5.157 on the number line.

ii) Which decimal is closer to 5.157? a)  5.16 b) 5.15iii) Round 5.157 to the nearest hundredth. 5.16iv) Did you round up or round down? round up

**PREVIEW**

Gain complete access to the largest collection of worksheets in all subjects!

Members, please log in to download this worksheet.

Not a member? Please sign up to gain complete access.

[www.mathworksheets4kids.com](http://www.mathworksheets4kids.com)