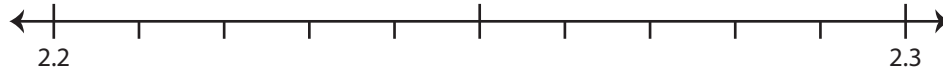


## Rounding Decimals

Use the number line to answer the questions.

1) 2.26

i) Mark 2.26 on the number line.



ii) Which decimal is closer to 2.26?

a) 2.3

b) 2.2

iii) Round 2.26 to the nearest tenth. \_\_\_\_\_

iv) Did you round up or round down? \_\_\_\_\_

2) 8.0579

i) Mark 8.0579 on the number line.



ii) Which decimal is closer to 8.0579?

a) 8.057

b) 8.058

iii) Round 8.0579 to the nearest thousandth. \_\_\_\_\_

iv) Did you round up or round down? \_\_\_\_\_

3) 55.213

i) Mark 55.213 on the number line.



ii) Which decimal is closer to 55.213?

a) 55.21

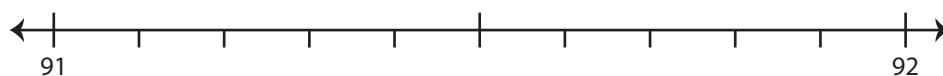
b) 55.22

iii) Round 55.213 to the nearest hundredth. \_\_\_\_\_

iv) Did you round up or round down? \_\_\_\_\_

4) 91.2

i) Mark 91.2 on the number line.



ii) Which whole number is closer to 91.2?

a) 91

b) 92

iii) Round 91.2 to the nearest whole number. \_\_\_\_\_

iv) Did you round up or round down? \_\_\_\_\_

# PREVIEW

Gain complete access to the largest  
collection of worksheets in all subjects!

Members, please  
log in to  
download this  
worksheet.

Not a member?  
Please sign up to  
gain complete  
access.

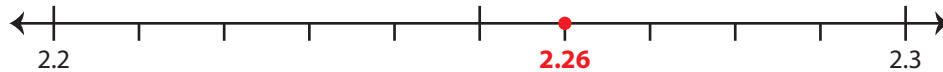
[www.mathworksheets4kids.com](http://www.mathworksheets4kids.com)

**Rounding Decimals**

Use the number line to answer the questions.

1) 2.26

i) Mark 2.26 on the number line.



ii) Which decimal is closer to 2.26?

 a) 2.3

b) 2.2

iii) Round 2.26 to the nearest tenth.

2.3

iv) Did you round up or round down?

round up

2) 8.0579

i) Mark 8.0579 on the number line.



ii) Which decimal is closer to 8.0579?

 a) 8.058

iii) Round 8.0579 to the nearest thousandth.

iv) Did you round up or round down?

3) 55.213

i) Mark 55.213 on the number line.



ii) Which decimal is closer to 55.213?

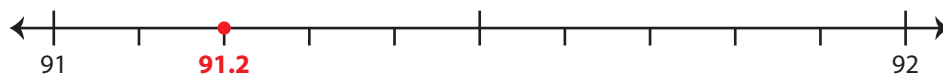
a) 55.22

iii) Round 55.213 to the nearest hundredth.

iv) Did you round up or round down?

4) 91.2

i) Mark 91.2 on the number line.



ii) Which whole number is closer to 91.2?

 a) 91

b) 92

iii) Round 91.2 to the nearest whole number.

91

iv) Did you round up or round down?

round down

# PREVIEW

Gain complete access to the largest  
collection of worksheets in all subjects!

Members, please  
log in to  
download this  
worksheet.

Not a member?  
Please sign up to  
gain complete  
access.

www.mathworksheets4kids.com