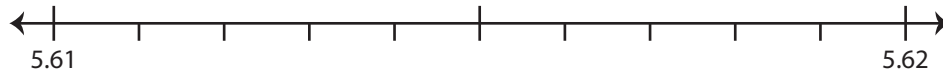


Rounding Decimals

Use the number line to answer the questions.

1) 5.611

i) Mark 5.611 on the number line.



ii) Which decimal is closer to 5.611? a) 5.61 b) 5.62

iii) Round 5.611 to the nearest hundredth. _____

iv) Did you round up or round down? _____

2) 11.57

i) Mark 11.57 on the number line.



ii) Which decimal is closer to 11.57? a) 11.5 b) 11.6

iii) Round 11.57 to the nearest tenth. _____

iv) Did you round up or round down? _____

3) 7.4

i) Mark 7.4 on the number line.



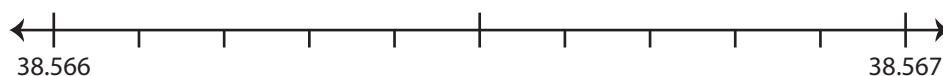
ii) Which whole number is closer to 7.4? a) 7 b) 8

iii) Round 7.4 to the nearest whole number. _____

iv) Did you round up or round down? _____

4) 38.5666

i) Mark 38.5666 on the number line.



ii) Which decimal is closer to 38.5666? a) 38.566 b) 38.567

iii) Round 38.5666 to the nearest thousandth. _____

iv) Did you round up or round down? _____

PREVIEW

Gain complete access to the largest
collection of worksheets in all subjects!

Members, please
log in to
download this
worksheet.

Not a member?
Please sign up to
gain complete
access.

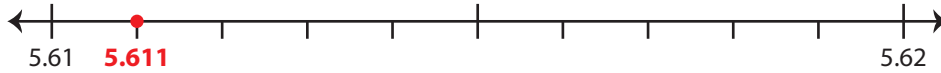
www.mathworksheets4kids.com

Rounding Decimals

Use the number line to answer the questions.

1) 5.611

i) Mark 5.611 on the number line.



ii) Which decimal is closer to 5.611?

a) 5.61 b) 5.62

iii) Round 5.611 to the nearest hundredth.

5.61

iv) Did you round up or round down?

round down

2) 11.57

i) Mark 11.57 on the number line.



ii) Which decimal is closer to 11.57?

a) 11.5 b) 11.6

iii) Round 11.57 to the nearest tenth.

PREVIEW

Gain complete access to the largest collection of worksheets in all subjects!

Members, please log in to download this worksheet.

Not a member? Please sign up to gain complete access.

www.mathworksheets4kids.com

iv) Did you round up or round down?

3) 7.4

i) Mark 7.4 on the number line.



ii) Which decimal is closer to 7.4?

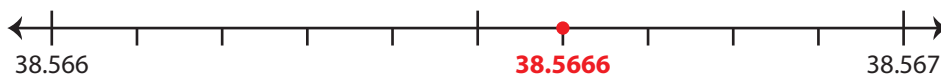
a) 7 b) 8

iii) Round 7.4 to the nearest whole number.

iv) Did you round up or round down?

4) 38.5666

i) Mark 38.5666 on the number line.



ii) Which decimal is closer to 38.5666?

a) 38.566 b) 38.567

iii) Round 38.5666 to the nearest thousandth.

38.567

iv) Did you round up or round down?

round up