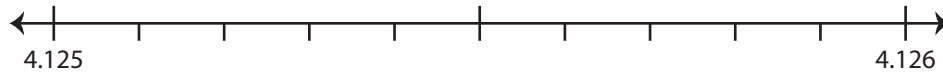


Rounding Decimals

Use the number line to answer the questions.

1) 4.1259

i) Mark 4.1259 on the number line.



ii) Which decimal is closer to 4.1259? a) 4.126 b) 4.125

iii) Round 4.1259 to the nearest thousandth. _____

iv) Did you round up or round down? _____

2) 69.2

i) Mark 69.2 on the number line.



ii) Which decimal is closer to 69.2? a) 69 b) 70

iii) Round 69.2 to the nearest whole number. _____

iv) Did you round up or round down? _____

3) 8.81

i) Mark 8.81 on the number line.



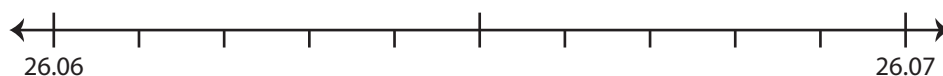
ii) Which decimal is closer to 8.81? a) 8.8 b) 8.9

iii) Round 8.81 to the nearest tenth. _____

iv) Did you round up or round down? _____

4) 26.067

i) Mark 26.067 on the number line.



ii) Which decimal is closer to 26.067? a) 26.06 b) 26.07

iii) Round 26.067 to the nearest hundredth. _____

iv) Did you round up or round down? _____

PREVIEW

Gain complete access to the largest
collection of worksheets in all subjects!

Members, please
log in to
download this
worksheet.

Not a member?
Please sign up to
gain complete
access.

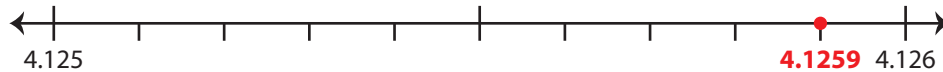
www.mathworksheets4kids.com

Rounding Decimals

Use the number line to answer the questions.

1) 4.1259

i) Mark 4.1259 on the number line.



ii) Which decimal is closer to 4.1259?

a) 4.126b) 4.125

iii) Round 4.1259 to the nearest thousandth.

4.126

iv) Did you round up or round down?

round up

2) 69.2

i) Mark 69.2 on the number line.



ii) Which decimal is closer to 69.2?

 69

iii) Round 69.2 to the nearest whole number.

iv) Did you round up or round down?

3) 8.81

i) Mark 8.81 on the number line.



ii) Which decimal is closer to 8.81?

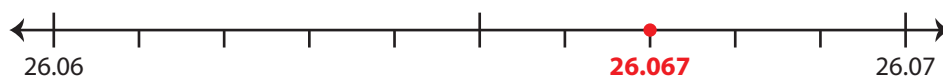
 8.8

iii) Round 8.81 to the nearest tenth.

iv) Did you round up or round down?

4) 26.067

i) Mark 26.067 on the number line.



ii) Which decimal is closer to 26.067?

a) 26.06b) 26.07

iii) Round 26.067 to the nearest hundredth.

26.07

iv) Did you round up or round down?

round up

PREVIEW

Gain complete access to the largest
collection of worksheets in all subjects!

Members, please
log in to
download this
worksheet.

Not a member?
Please sign up to
gain complete
access.

www.mathworksheets4kids.com