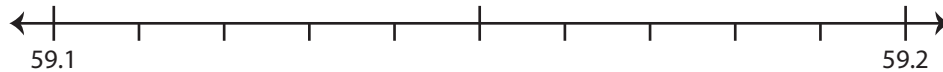


## Rounding to Nearest Tenth

Use the number line to answer the questions.

1) 59.14

i) Mark 59.14 on the number line.



ii) Which decimal is closer to 59.14? a) 59.2 b) 59.1

iii) Round 59.14 to the nearest tenth. \_\_\_\_\_

iv) Did you round up or round down? \_\_\_\_\_

2) 3.86

i) Mark 3.86 on the number line.



ii) Which decimal is closer to 3.86? a) 3.8 b) 3.9

iii) Round 3.86 to the nearest tenth. \_\_\_\_\_

iv) Did you round up or round down? \_\_\_\_\_

3) 75.27

i) Mark 75.27 on the number line.



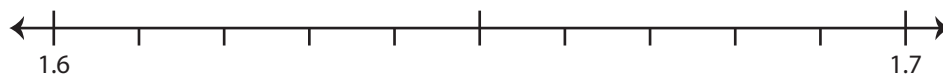
ii) Which decimal is closer to 75.27? a) 75.2 b) 75.3

iii) Round 75.27 to the nearest tenth. \_\_\_\_\_

iv) Did you round up or round down? \_\_\_\_\_

4) 1.61

i) Mark 1.61 on the number line.



ii) Which decimal is closer to 1.61? a) 1.6 b) 1.7

iii) Round 1.61 to the nearest tenth. \_\_\_\_\_

iv) Did you round up or round down? \_\_\_\_\_

# PREVIEW

Gain complete access to the largest collection of worksheets in all subjects!

Members, please log in to download this worksheet.

Not a member? Please sign up to gain complete access.

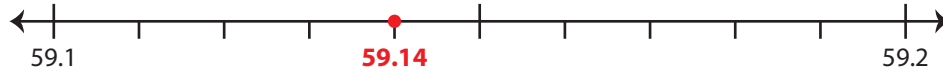
[www.mathworksheets4kids.com](http://www.mathworksheets4kids.com)

**Rounding to Nearest Tenth**

Use the number line to answer the questions.

1) 59.14

i) Mark 59.14 on the number line.

ii) Which decimal is closer to 59.14? a) 59.2  b)  59.1iii) Round 59.14 to the nearest tenth. 59.1iv) Did you round up or round down? round down

2) 3.86

i) Mark 3.86 on the number line.

ii) Which decimal is closer to 3.86? a) 3.8  b) 3.9 iii) Round 3.86 to the nearest tenth. 3.9iv) Did you round up or round down? round up

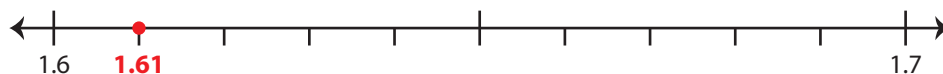
3) 75.27

i) Mark 75.27 on the number line.

ii) Which decimal is closer to 75.27? a) 75.2  b) 75.3 iii) Round 75.27 to the nearest tenth. 75.3iv) Did you round up or round down? round up

4) 1.61

i) Mark 1.61 on the number line.

ii) Which decimal is closer to 1.61? a)  1.6 b) 1.7 iii) Round 1.61 to the nearest tenth. 1.6iv) Did you round up or round down? round down

**PREVIEW**

Gain complete access to the largest collection of worksheets in all subjects!

Members, please log in to download this worksheet.

Not a member? Please sign up to gain complete access.

[www.mathworksheets4kids.com](http://www.mathworksheets4kids.com)