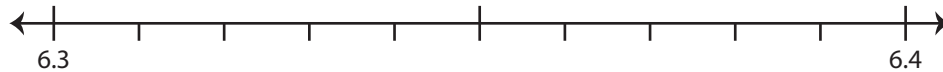


Rounding to Nearest Tenth

Use the number line to answer the questions.

1) 6.33

i) Mark 6.33 on the number line.



ii) Which decimal is closer to 6.33? a) 6.3 b) 6.4

iii) Round 6.33 to the nearest tenth. _____

iv) Did you round up or round down? _____

2) 92.74

i) Mark 92.74 on the number line.



ii) Which decimal is closer to 92.74? a) 92.7 b) 92.8

iii) Round 92.74 to the nearest tenth. _____

iv) Did you round up or round down? _____

3) 4.88

i) Mark 4.88 on the number line.



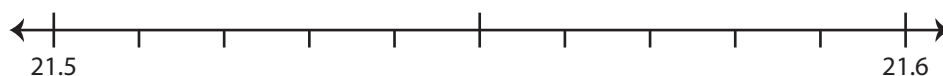
ii) Which decimal is closer to 4.88? a) 4.8 b) 4.9

iii) Round 4.88 to the nearest tenth. _____

iv) Did you round up or round down? _____

4) 21.56

i) Mark 21.56 on the number line.



ii) Which decimal is closer to 21.56? a) 21.5 b) 21.6

iii) Round 21.56 to the nearest tenth. _____

iv) Did you round up or round down? _____

PREVIEW

Gain complete access to the largest
collection of worksheets in all subjects!

Members, please
log in to
download this
worksheet.

Not a member?
Please sign up to
gain complete
access.

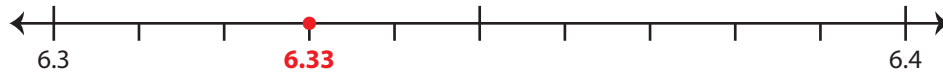
www.mathworksheets4kids.com

Rounding to Nearest Tenth

Use the number line to answer the questions.

1) 6.33

i) Mark 6.33 on the number line.



ii) Which decimal is closer to 6.33?

a) 6.3 b) 6.4

iii) Round 6.33 to the nearest tenth.

6.3

iv) Did you round up or round down?

round down

2) 92.74

i) Mark 92.74 on the number line.



ii) Which decimal is closer to 92.74?

iii) Round 92.74 to the nearest tenth.

iv) Did you round up or round down?

3) 4.88

i) Mark 4.88 on the number line.



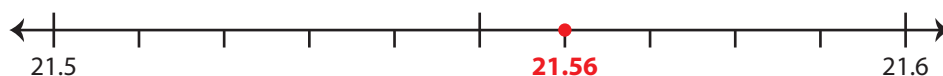
ii) Which decimal is closer to 4.88?

iii) Round 4.88 to the nearest tenth.

iv) Did you round up or round down?

4) 21.56

i) Mark 21.56 on the number line.



ii) Which decimal is closer to 21.56?

a) 21.5 b) 21.6

iii) Round 21.56 to the nearest tenth.

21.6

iv) Did you round up or round down?

round up

PREVIEW

Gain complete access to the largest collection of worksheets in all subjects!

Members, please log in to download this worksheet.

Not a member? Please sign up to gain complete access.

www.mathworksheets4kids.com