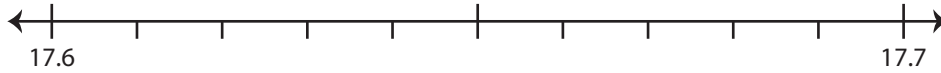


Rounding to Nearest Tenth

Use the number line to answer the questions.

1) 17.68

i) Mark 17.68 on the number line.



ii) Which decimal is closer to 17.68? a) 17.6 b) 17.7

iii) Round 17.68 to the nearest tenth. _____

iv) Did you round up or round down? _____

2) 46.42

i) Mark 46.42 on the number line.



ii) Which decimal is closer to 46.42? a) 46.4 b) 46.5

iii) Round 46.42 to the nearest tenth. _____

iv) Did you round up or round down? _____

3) 8.13

i) Mark 8.13 on the number line.



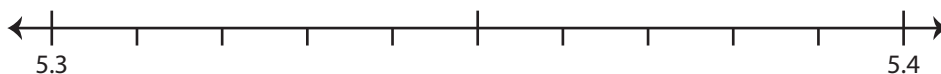
ii) Which decimal is closer to 8.13? a) 8.1 b) 8.2

iii) Round 8.13 to the nearest tenth. _____

iv) Did you round up or round down? _____

4) 5.39

i) Mark 5.39 on the number line.



ii) Which decimal is closer to 5.39? a) 5.4 b) 5.3

iii) Round 5.39 to the nearest tenth. _____

iv) Did you round up or round down? _____

PREVIEW

Gain complete access to the largest
collection of worksheets in all subjects!

Members, please
log in to
download this
worksheet.

Not a member?
Please sign up to
gain complete
access.

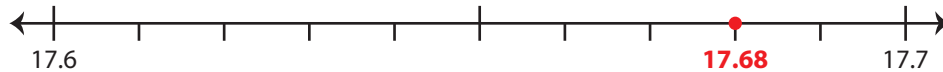
www.mathworksheets4kids.com

Rounding to Nearest Tenth

Use the number line to answer the questions.

1) 17.68

i) Mark 17.68 on the number line.

ii) Which decimal is closer to 17.68? a) 17.6 b) 17.7 iii) Round 17.68 to the nearest tenth. 17.7iv) Did you round up or round down? round up

2) 46.42

i) Mark 46.42 on the number line.

ii) Which decimal is closer to 46.42? a) 46.4 b) 46.5 iii) Round 46.42 to the nearest tenth. 46.4iv) Did you round up or round down? round down

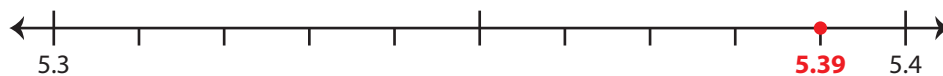
3) 8.13

i) Mark 8.13 on the number line.

ii) Which decimal is closer to 8.13? a) 8.1 b) 8.2 iii) Round 8.13 to the nearest tenth. 8.1iv) Did you round up or round down? round down

4) 5.39

i) Mark 5.39 on the number line.

ii) Which decimal is closer to 5.39? a) 5.4 b) 5.3 iii) Round 5.39 to the nearest tenth. 5.4iv) Did you round up or round down? round up

PREVIEW

Gain complete access to the largest collection of worksheets in all subjects!

Members, please log in to download this worksheet.

Not a member? Please sign up to gain complete access.

www.mathworksheets4kids.com