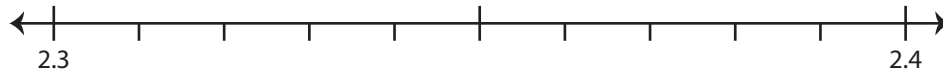


## Rounding to Nearest Tenth

Use the number line to answer the questions.

1) 2.36

i) Mark 2.36 on the number line.



ii) Which decimal is closer to 2.36? a) 2.3 b) 2.4

iii) Round 2.36 to the nearest tenth. \_\_\_\_\_

iv) Did you round up or round down? \_\_\_\_\_

2) 58.18

i) Mark 58.18 on the number line.



ii) Which decimal is closer to 58.18? a) 58.1 b) 58.2

iii) Round 58.18 to the nearest tenth. \_\_\_\_\_

iv) Did you round up or round down? \_\_\_\_\_

3) 34.64

i) Mark 34.64 on the number line.



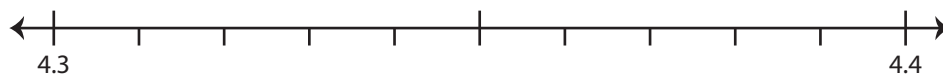
ii) Which decimal is closer to 34.64? a) 34.6 b) 34.7

iii) Round 34.64 to the nearest tenth. \_\_\_\_\_

iv) Did you round up or round down? \_\_\_\_\_

4) 4.31

i) Mark 4.31 on the number line.



ii) Which decimal is closer to 4.31? a) 4.4 b) 4.3

iii) Round 4.31 to the nearest tenth. \_\_\_\_\_

iv) Did you round up or round down? \_\_\_\_\_

# PREVIEW

Gain complete access to the largest  
collection of worksheets in all subjects!

Members, please  
log in to  
download this  
worksheet.

Not a member?  
Please sign up to  
gain complete  
access.

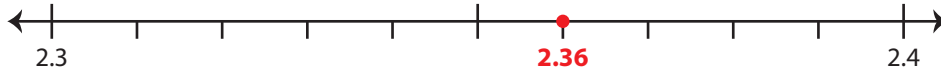
[www.mathworksheets4kids.com](http://www.mathworksheets4kids.com)

**Rounding to Nearest Tenth**

Use the number line to answer the questions.

1) 2.36

i) Mark 2.36 on the number line.



ii) Which decimal is closer to 2.36?

a) 2.3     b) 2.4

iii) Round 2.36 to the nearest tenth.

2.4

iv) Did you round up or round down?

round up

2) 58.18

i) Mark 58.18 on the number line.



ii) Which decimal is closer to 58.18?

58.1

iii) Round 58.18 to the nearest tenth.

**PREVIEW**

Gain complete access to the largest collection of worksheets in all subjects!

Members, please log in to download this worksheet.

Not a member? Please sign up to gain complete access.

[www.mathworksheets4kids.com](http://www.mathworksheets4kids.com)

iv) Did you round up or round down?

3) 34.64

i) Mark 34.64 on the number line.



ii) Which decimal is closer to 34.64?

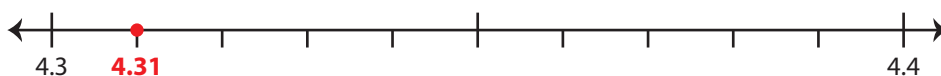
34.7

iii) Round 34.64 to the nearest tenth.

iv) Did you round up or round down?

4) 4.31

i) Mark 4.31 on the number line.



ii) Which decimal is closer to 4.31?

a) 4.4     b) 4.3

iii) Round 4.31 to the nearest tenth.

4.3

iv) Did you round up or round down?

round down