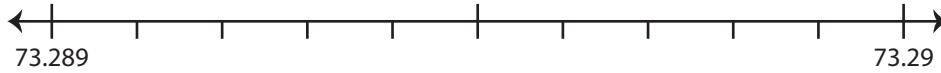


## Rounding to Nearest Thousandth

Use the number line to answer the questions.

1) 73.2894

i) Mark 73.2894 on the number line.



ii) Which decimal is closer to 73.2894?      a) 73.29      b) 73.289

iii) Round 73.2894 to the nearest thousandth. \_\_\_\_\_

iv) Did you round up or round down? \_\_\_\_\_

2) 2.3657

i) Mark 2.3657 on the number line.



ii) Which decimal is closer to 2.3657?      a) 2.366      b) 2.365

iii) Round 2.3657 to the nearest thousandth. \_\_\_\_\_

iv) Did you round up or round down? \_\_\_\_\_

3) 6.1083

i) Mark 6.1083 on the number line.



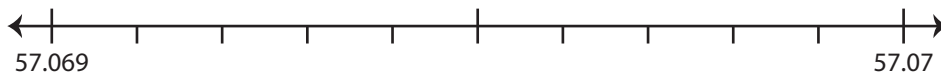
ii) Which decimal is closer to 6.1083?      a) 6.109      b) 6.108

iii) Round 6.1083 to the nearest thousandth. \_\_\_\_\_

iv) Did you round up or round down? \_\_\_\_\_

4) 57.0699

i) Mark 57.0699 on the number line.



ii) Which decimal is closer to 57.0699?      a) 57.069      b) 57.07

iii) Round 57.0699 to the nearest thousandth. \_\_\_\_\_

iv) Did you round up or round down? \_\_\_\_\_

# PREVIEW

Gain complete access to the largest  
collection of worksheets in all subjects!

Members, please  
log in to  
download this  
worksheet.

Not a member?  
Please sign up to  
gain complete  
access.

[www.mathworksheets4kids.com](http://www.mathworksheets4kids.com)

**Rounding to Nearest Thousandth**

Use the number line to answer the questions.

1) 73.2894

i) Mark 73.2894 on the number line.

ii) Which decimal is closer to 73.2894? a) 73.29  b)  73.289iii) Round 73.2894 to the nearest thousandth. 73.289iv) Did you round up or round down? round down

2) 2.3657

i) Mark 2.3657 on the number line.

ii) Which decimal is closer to 2.3657? a) 2.366  b) 2.365 iii) Round 2.3657 to the nearest thousandth. 2.366iv) Did you round up or round down? round up

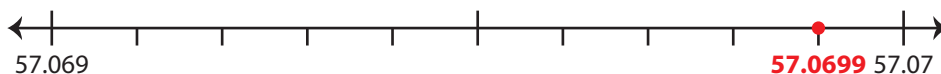
3) 6.1083

i) Mark 6.1083 on the number line.

ii) Which decimal is closer to 6.1083? a) 6.109  b) 6.108 iii) Round 6.1083 to the nearest thousandth. 6.108iv) Did you round up or round down? round down

4) 57.0699

i) Mark 57.0699 on the number line.

ii) Which decimal is closer to 57.0699? a) 57.069  b)  57.07iii) Round 57.0699 to the nearest thousandth. 57.07iv) Did you round up or round down? round up

**PREVIEW**

Gain complete access to the largest  
collection of worksheets in all subjects!

Members, please  
log in to  
download this  
worksheet.

Not a member?  
Please sign up to  
gain complete  
access.

[www.mathworksheets4kids.com](http://www.mathworksheets4kids.com)