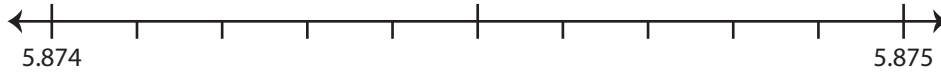


Rounding to Nearest Thousandth

Use the number line to answer the questions.

1) 5.8743

i) Mark 5.8743 on the number line.



ii) Which decimal is closer to 5.8743? a) 5.874 b) 5.875

iii) Round 5.8743 to the nearest thousandth. _____

iv) Did you round up or round down? _____

2) 95.2056

i) Mark 95.2056 on the number line.



ii) Which decimal is closer to 95.2056? a) 95.205 b) 95.206

iii) Round 95.2056 to the nearest thousandth. _____

iv) Did you round up or round down? _____

3) 41.3518

i) Mark 41.3518 on the number line.



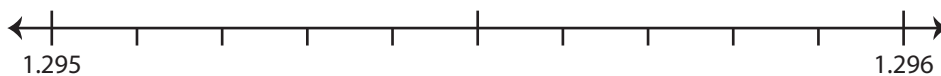
ii) Which decimal is closer to 41.3518? a) 41.351 b) 41.352

iii) Round 41.3518 to the nearest thousandth. _____

iv) Did you round up or round down? _____

4) 1.2951

i) Mark 1.2951 on the number line.



ii) Which decimal is closer to 1.2951? a) 1.295 b) 1.296

iii) Round 1.2951 to the nearest thousandth. _____

iv) Did you round up or round down? _____

PREVIEW

Gain complete access to the largest
collection of worksheets in all subjects!

Members, please
log in to
download this
worksheet.

Not a member?
Please sign up to
gain complete
access.

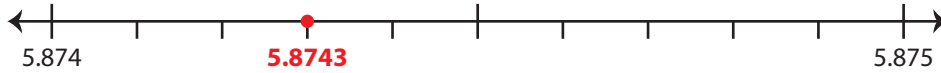
www.mathworksheets4kids.com

Rounding to Nearest Thousandth

Use the number line to answer the questions.

1) 5.8743

i) Mark 5.8743 on the number line.

ii) Which decimal is closer to 5.8743? a) 5.874 b) 5.875iii) Round 5.8743 to the nearest thousandth. 5.874iv) Did you round up or round down? round down

2) 95.2056

i) Mark 95.2056 on the number line.

ii) Which decimal is closer to 95.2056? a) 95.205 b) 95.206iii) Round 95.2056 to the nearest thousandth. 95.206iv) Did you round up or round down? round up

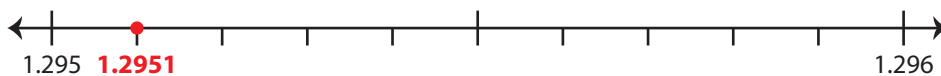
3) 41.3518

i) Mark 41.3518 on the number line.

ii) Which decimal is closer to 41.3518? a) 41.351 b) 41.352iii) Round 41.3518 to the nearest thousandth. 41.352iv) Did you round up or round down? round up

4) 1.2951

i) Mark 1.2951 on the number line.

ii) Which decimal is closer to 1.2951? a) 1.295 b) 1.296iii) Round 1.2951 to the nearest thousandth. 1.295iv) Did you round up or round down? round down

PREVIEW

Gain complete access to the largest
collection of worksheets in all subjects!

Members, please
log in to
download this
worksheet.

Not a member?
Please sign up to
gain complete
access.

www.mathworksheets4kids.com