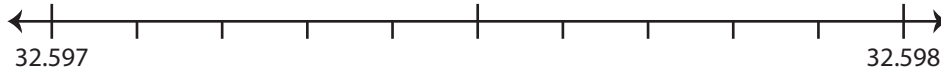


Rounding to Nearest Thousandth

Use the number line to answer the questions.

1) 32.5978

i) Mark 32.5978 on the number line.



ii) Which decimal is closer to 32.5978? a) 32.597 b) 32.598

iii) Round 32.5978 to the nearest thousandth. _____

iv) Did you round up or round down? _____

2) 8.6402

i) Mark 8.64



ii) Which decimal is closer to 8.6402? a) 8.64 b) 8.641

iii) Round 8.6402 to the nearest thousandth. _____

iv) Did you round up or round down? _____

3) 5.0026

i) Mark 5.00



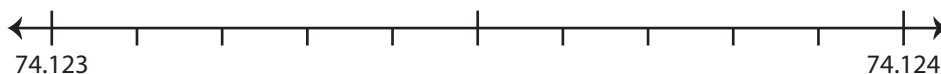
ii) Which decimal is closer to 5.0026? a) 5.002 b) 5.003

iii) Round 5.0026 to the nearest thousandth. _____

iv) Did you round up or round down? _____

4) 74.1234

i) Mark 74.1234 on the number line.



ii) Which decimal is closer to 74.1234? a) 74.123 b) 74.124

iii) Round 74.1234 to the nearest thousandth. _____

iv) Did you round up or round down? _____

PREVIEW

Gain complete access to the largest
collection of worksheets in all subjects!

Members, please
log in to
download this
worksheet.

Not a member?
Please sign up to
gain complete
access.

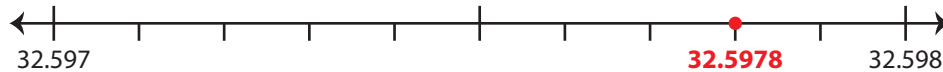
www.mathworksheets4kids.com

Rounding to Nearest Thousandth

Use the number line to answer the questions.

1) 32.5978

i) Mark 32.5978 on the number line.

ii) Which decimal is closer to 32.5978? a) 32.597 b) 32.598iii) Round 32.5978 to the nearest thousandth. 32.598iv) Did you round up or round down? round up

2) 8.6402

i) Mark 8.64

ii) Which decimal is closer to 8.6402? a) 8.64 b) 8.641 iii) Round 8.6402 to the nearest thousandth. 8.640iv) Did you round up or round down? round down

3) 5.0026

i) Mark 5.00

ii) Which decimal is closer to 5.0026? a) 5.003 b) 5.002 iii) Round 5.0026 to the nearest thousandth. 5.003iv) Did you round up or round down? round up

4) 74.1234

i) Mark 74.1234 on the number line.

ii) Which decimal is closer to 74.1234? a) 74.123 b) 74.124 iii) Round 74.1234 to the nearest thousandth. 74.123iv) Did you round up or round down? round down

PREVIEW

Gain complete access to the largest
collection of worksheets in all subjects!

Members, please
log in to
download this
worksheet.

Not a member?
Please sign up to
gain complete
access.

www.mathworksheets4kids.com