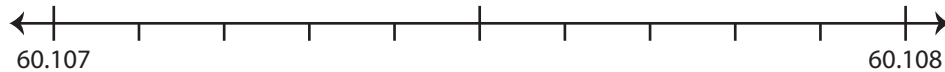


## Rounding to Nearest Thousandth

Use the number line to answer the questions.

1) 60.1076

i) Mark 60.1076 on the number line.



ii) Which decimal is closer to 60.1076? a) 60.108 b) 60.107

iii) Round 60.1076 to the nearest thousandth. \_\_\_\_\_

iv) Did you round up or round down? \_\_\_\_\_

2) 19.5231

i) Mark 19.5231 on the number line.



ii) Which decimal is closer to 19.5231? a) 19.523 b) 19.524

iii) Round 19.5231 to the nearest thousandth. \_\_\_\_\_

iv) Did you round up or round down? \_\_\_\_\_

3) 3.3334

i) Mark 3.3334 on the number line.



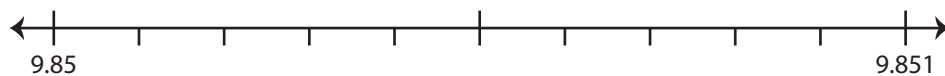
ii) Which decimal is closer to 3.3334? a) 3.333 b) 3.334

iii) Round 3.3334 to the nearest thousandth. \_\_\_\_\_

iv) Did you round up or round down? \_\_\_\_\_

4) 9.8508

i) Mark 9.8508 on the number line.



ii) Which decimal is closer to 9.8508? a) 9.85 b) 9.851

iii) Round 9.8508 to the nearest thousandth. \_\_\_\_\_

iv) Did you round up or round down? \_\_\_\_\_

# PREVIEW

Gain complete access to the largest  
collection of worksheets in all subjects!

Members, please  
log in to  
download this  
worksheet.

Not a member?  
Please sign up to  
gain complete  
access.

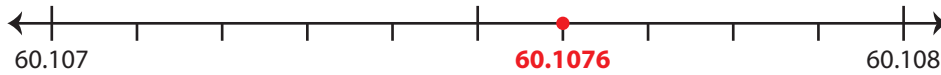
[www.mathworksheets4kids.com](http://www.mathworksheets4kids.com)

**Rounding to Nearest Thousandth**

Use the number line to answer the questions.

1) 60.1076

i) Mark 60.1076 on the number line.

ii) Which decimal is closer to 60.1076?  a) 60.108    b) 60.107iii) Round 60.1076 to the nearest thousandth. 60.108iv) Did you round up or round down? round up

2) 19.5231

i) Mark 19.5231 on the number line.

ii) Which decimal is closer to 19.5231?  a) 19.523    b) 19.524iii) Round 19.5231 to the nearest thousandth. 19.523iv) Did you round up or round down? round down

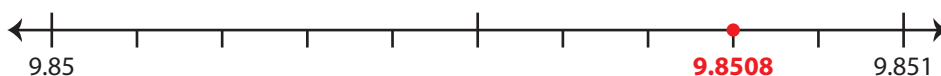
3) 3.3334

i) Mark 3.3334 on the number line.

ii) Which decimal is closer to 3.3334?  a) 3.333    b) 3.334iii) Round 3.3334 to the nearest thousandth. 3.333iv) Did you round up or round down? round down

4) 9.8508

i) Mark 9.8508 on the number line.

ii) Which decimal is closer to 9.8508?  a) 9.85     b) 9.851iii) Round 9.8508 to the nearest thousandth. 9.851iv) Did you round up or round down? round up

# PREVIEW

Gain complete access to the largest  
collection of worksheets in all subjects!

Members, please  
log in to  
download this  
worksheet.

Not a member?  
Please sign up to  
gain complete  
access.

www.mathworksheets4kids.com