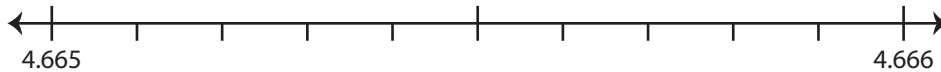


Rounding to Nearest Thousandth

Use the number line to answer the questions.

1) 4.6659

i) Mark 4.6659 on the number line.



ii) Which decimal is closer to 4.6659? a) 4.666 b) 4.665

iii) Round 4.6659 to the nearest thousandth. _____

iv) Did you round up or round down? _____

2) 7.0738

i) Mark 7.0738 on the number line.



ii) Which decimal is closer to 7.0738? a) 7.073 b) 7.074

iii) Round 7.0738 to the nearest thousandth. _____

iv) Did you round up or round down? _____

3) 86.1472

i) Mark 86.1472 on the number line.



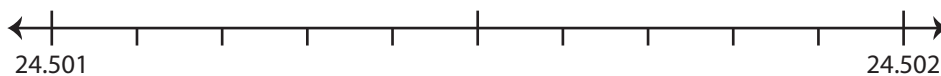
ii) Which decimal is closer to 86.1472? a) 86.147 b) 86.148

iii) Round 86.1472 to the nearest thousandth. _____

iv) Did you round up or round down? _____

4) 24.5013

i) Mark 24.5013 on the number line.



ii) Which decimal is closer to 24.5013? a) 24.502 b) 24.501

iii) Round 24.5013 to the nearest thousandth. _____

iv) Did you round up or round down? _____

PREVIEW

Gain complete access to the largest collection of worksheets in all subjects!

Members, please log in to download this worksheet.

Not a member? Please sign up to gain complete access.

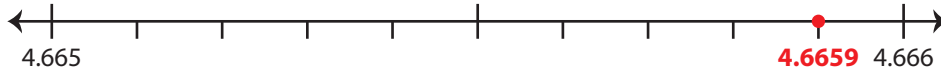
www.mathworksheets4kids.com

Rounding to Nearest Thousandth

Use the number line to answer the questions.

1) 4.6659

i) Mark 4.6659 on the number line.



ii) Which decimal is closer to 4.6659?

a) 4.666

b) 4.665

iii) Round 4.6659 to the nearest thousandth.

4.666

iv) Did you round up or round down?

round up

2) 7.0738

i) Mark 7.0738 on the number line.



ii) Which decimal is closer to 7.0738?

a) 7.074

b) 7.073

iii) Round 7.0738 to the nearest thousandth.

iv) Did you round up or round down?

3) 86.1472

i) Mark 86.1472 on the number line.



ii) Which decimal is closer to 86.1472?

a) 86.148

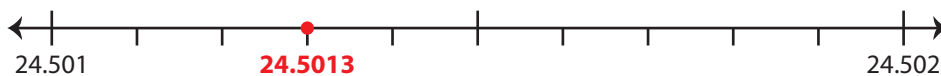
b) 86.147

iii) Round 86.1472 to the nearest thousandth.

iv) Did you round up or round down?

4) 24.5013

i) Mark 24.5013 on the number line.



ii) Which decimal is closer to 24.5013?

a) 24.502

b) 24.501

iii) Round 24.5013 to the nearest thousandth.

24.501

iv) Did you round up or round down?

round down

PREVIEW

Gain complete access to the largest
collection of worksheets in all subjects!

Members, please
log in to
download this
worksheet.

Not a member?
Please sign up to
gain complete
access.

www.mathworksheets4kids.com