

Name : \_\_\_\_\_

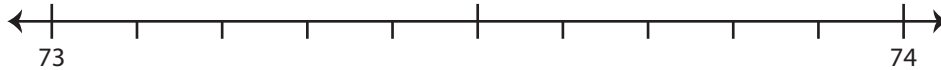
## Rounding to Whole Number

Sheet 1

Use the number line to answer the questions.

1) 73.6

i) Mark 73.6 on the number line.



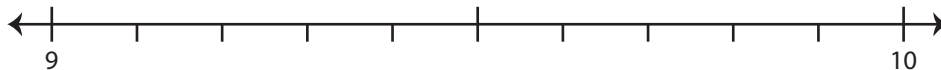
ii) Which whole number is closer to 73.6? a) 74 b) 73

iii) Round 73.6 to the nearest whole number. \_\_\_\_\_

iv) Did you round up or round down? \_\_\_\_\_

2) 9.4

i) Mark 9.4 on the number line.



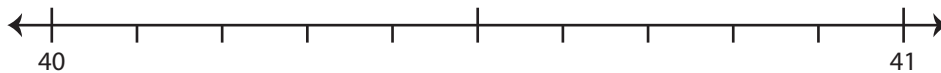
ii) Which whole number is closer to 9.4? a) 10 b) 9

iii) Round 9.4 to the nearest whole number. \_\_\_\_\_

iv) Did you round up or round down? \_\_\_\_\_

3) 40.8

i) Mark 40.8 on the number line.



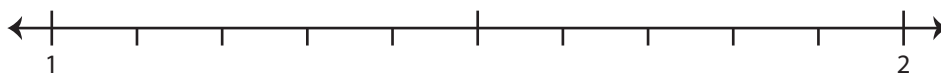
ii) Which whole number is closer to 40.8? a) 40 b) 41

iii) Round 40.8 to the nearest whole number. \_\_\_\_\_

iv) Did you round up or round down? \_\_\_\_\_

4) 1.3

i) Mark 1.3 on the number line.



ii) Which whole number is closer to 1.3? a) 1 b) 2

iii) Round 1.3 to the nearest whole number. \_\_\_\_\_

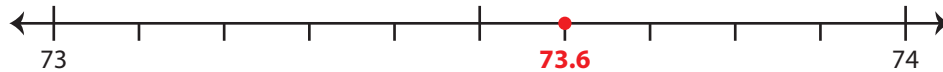
iv) Did you round up or round down? \_\_\_\_\_

**Rounding to Whole Number**

Use the number line to answer the questions.

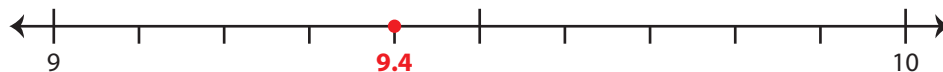
1) 73.6

i) Mark 73.6 on the number line.

ii) Which whole number is closer to 73.6?  a) 74      b) 73iii) Round 73.6 to the nearest whole number. 74iv) Did you round up or round down? round up

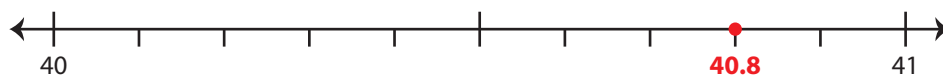
2) 9.4

i) Mark 9.4 on the number line.

ii) Which whole number is closer to 9.4? a) 10       b) 9iii) Round 9.4 to the nearest whole number. 9iv) Did you round up or round down? round down

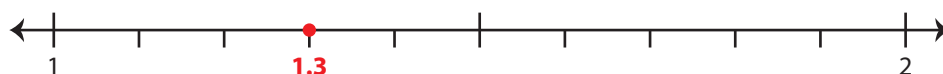
3) 40.8

i) Mark 40.8 on the number line.

ii) Which whole number is closer to 40.8? a) 40       b) 41iii) Round 40.8 to the nearest whole number. 41iv) Did you round up or round down? round up

4) 1.3

i) Mark 1.3 on the number line.

ii) Which whole number is closer to 1.3?  a) 1      b) 2iii) Round 1.3 to the nearest whole number. 1iv) Did you round up or round down? round down