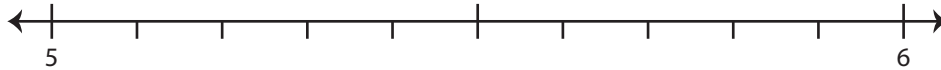


## Rounding to Whole Number

Use the number line to answer the questions.

1) 5.2

i) Mark 5.2 on the number line.



ii) Which whole number is closer to 5.2? a) 6 b) 5

iii) Round 5.2 to the nearest whole number. \_\_\_\_\_

iv) Did you round up or round down? \_\_\_\_\_

2) 82.7

i) Mark 82.7



ii) Which whole number is closer to 82.7? a) 82 b) 83

iii) Round 82.7 to the nearest whole number. \_\_\_\_\_

iv) Did you round up or round down? \_\_\_\_\_

3) 2.1

i) Mark 2.1



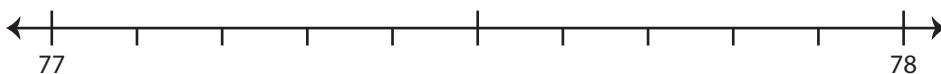
ii) Which whole number is closer to 2.1? a) 2 b) 3

iii) Round 2.1 to the nearest whole number. \_\_\_\_\_

iv) Did you round up or round down? \_\_\_\_\_

4) 77.9

i) Mark 77.9 on the number line.



ii) Which whole number is closer to 77.9? a) 78 b) 77

iii) Round 77.9 to the nearest whole number. \_\_\_\_\_

iv) Did you round up or round down? \_\_\_\_\_

# PREVIEW

Gain complete access to the largest  
collection of worksheets in all subjects!

Members, please  
log in to  
download this  
worksheet.

Not a member?  
Please sign up to  
gain complete  
access.

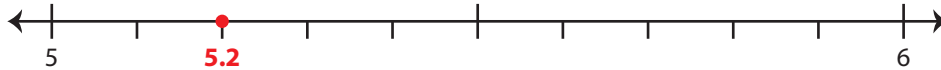
www.mathworksheets4kids.com

**Rounding to Whole Number**

Use the number line to answer the questions.

1) 5.2

i) Mark 5.2 on the number line.

ii) Which whole number is closer to 5.2? a) 6  b)  5iii) Round 5.2 to the nearest whole number. 5iv) Did you round up or round down? round down

2) 82.7

i) Mark 82.7

ii) Which whole number is closer to 82.7? a) 82  b)  83iii) Round 82.7 to the nearest whole number. 83iv) Did you round up or round down? round up

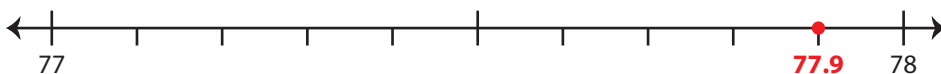
3) 2.1

i) Mark 2.1

ii) Which whole number is closer to 2.1? a) 2  b) 3iii) Round 2.1 to the nearest whole number. 2iv) Did you round up or round down? round down

4) 77.9

i) Mark 77.9 on the number line.

ii) Which whole number is closer to 77.9? a)  78 b) 77iii) Round 77.9 to the nearest whole number. 78iv) Did you round up or round down? round up

**PREVIEW**

Gain complete access to the largest collection of worksheets in all subjects!

Members, please log in to download this worksheet.

Not a member? Please sign up to gain complete access.

[www.mathworksheets4kids.com](http://www.mathworksheets4kids.com)