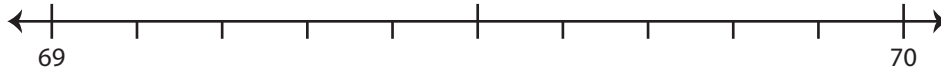


Use the number line to answer the questions.

1) 69.3

i) Mark 69.3 on the number line.



ii) Which whole number is closer to 69.3? a) 69 b) 70

iii) Round 69.3 to the nearest whole number. _____

iv) Did you round up or round down? _____

2) 4.4

i) Mark 4.4 on the number line.



ii) Which whole number is closer to 4.4? a) 4 b) 5

iii) Round 4.4 to the nearest whole number. _____

iv) Did you round up or round down? _____

3) 95.7

i) Mark 95.7 on the number line.



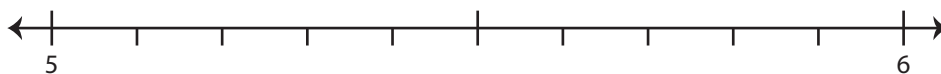
ii) Which whole number is closer to 95.7? a) 95 b) 96

iii) Round 95.7 to the nearest whole number. _____

iv) Did you round up or round down? _____

4) 5.6

i) Mark 5.6 on the number line.



ii) Which whole number is closer to 5.6? a) 6 b) 5

iii) Round 5.6 to the nearest whole number. _____

iv) Did you round up or round down? _____

PREVIEW

Gain complete access to the largest
collection of worksheets in all subjects!

Members, please
log in to
download this
worksheet.

Not a member?
Please sign up to
gain complete
access.

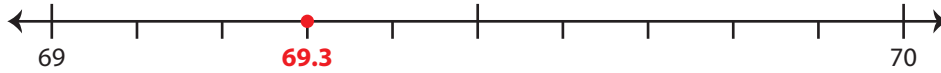
www.mathworksheets4kids.com

Rounding to Whole Number

Use the number line to answer the questions.

1) 69.3

i) Mark 69.3 on the number line.

ii) Which whole number is closer to 69.3? a) 69 b) 70iii) Round 69.3 to the nearest whole number. 69iv) Did you round up or round down? round down

2) 4.4

i) Mark 4.4 on the number line.

ii) Which whole number is closer to 4.4? a) 4 b) 5iii) Round 4.4 to the nearest whole number. 4iv) Did you round up or round down? round down

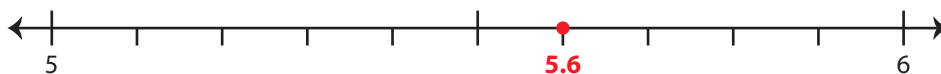
3) 95.7

i) Mark 95.7 on the number line.

ii) Which whole number is closer to 95.7? a) 95 b) 96iii) Round 95.7 to the nearest whole number. 96iv) Did you round up or round down? round up

4) 5.6

i) Mark 5.6 on the number line.

ii) Which whole number is closer to 5.6? a) 6 b) 5iii) Round 5.6 to the nearest whole number. 6iv) Did you round up or round down? round up

PREVIEW

Gain complete access to the largest collection of worksheets in all subjects!

Members, please log in to download this worksheet.

Not a member? Please sign up to gain complete access.

www.mathworksheets4kids.com