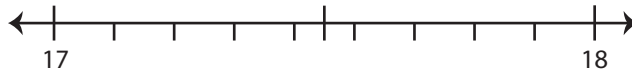


Rounding Mixed Number: Number Line

Round each mixed number to the nearest half using number line.

1) $17\frac{7}{9}$

- i) Label $17\frac{7}{9}$ on the number line.



- ii) Which is closer to $17\frac{7}{9}$? a) 17 b) $17\frac{1}{2}$ c) 18

iii) $17\frac{7}{9}$ rounded to the nearest half is _____

2) $5\frac{1}{5}$

- i) Label $5\frac{1}{5}$ on the number line.

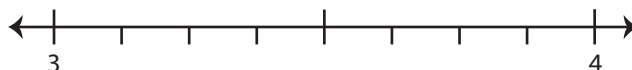


- ii) Which is closer to $5\frac{1}{5}$? a) 5 b) $5\frac{1}{2}$ c) 6

iii) $5\frac{1}{5}$ rounded to the nearest half is _____

3) $3\frac{5}{8}$

- i) Label $3\frac{5}{8}$ on the number line.



- ii) Which is closer to $3\frac{5}{8}$? a) $3\frac{1}{2}$ b) 4 c) 3

iii) $3\frac{5}{8}$ rounded to the nearest half is _____

PREVIEW

Gain complete access to the largest collection of worksheets in all subjects!

Members, please log in to download this worksheet.

Not a member? Please sign up to gain complete access.

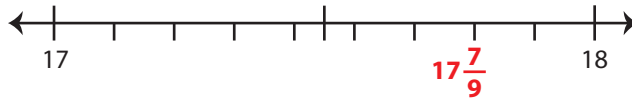
www.mathworksheets4kids.com

Rounding Mixed Number: Number Line

Round each mixed number to the nearest half using number line.

1) $17\frac{7}{9}$

i) Label $17\frac{7}{9}$ on the number line.



ii) Which is closer to $17\frac{7}{9}$? a) 17 b) $17\frac{1}{2}$ c) 18

iii) $17\frac{7}{9}$ rounded to the nearest half is _____

2) $5\frac{1}{5}$

i) Label $5\frac{1}{5}$ on the number line.

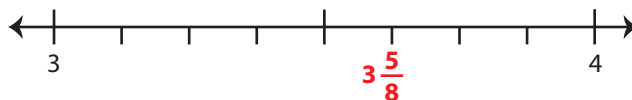


ii) Which is closer to $5\frac{1}{5}$? a) 5 b) $5\frac{1}{2}$ c) 6

iii) $5\frac{1}{5}$ rounded to the nearest half is _____

3) $3\frac{5}{8}$

i) Label $3\frac{5}{8}$ on the number line.



ii) Which is closer to $3\frac{5}{8}$? a) $3\frac{1}{2}$ b) 4 c) 3

iii) $3\frac{5}{8}$ rounded to the nearest half is $3\frac{1}{2}$

PREVIEW

Gain complete access to the largest collection of worksheets in all subjects!

Members, please log in to download this worksheet.

Not a member? Please sign up to gain complete access.

www.mathworksheets4kids.com