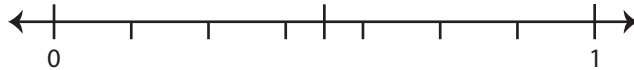


Rounding Proper Fraction: Number Line

Round each fraction to the nearest half using number line.

1) $\frac{5}{7}$

i) Label $\frac{5}{7}$ on the number line.



ii) Which is closer to $\frac{5}{7}$? a) 0 b) $\frac{1}{2}$ c) 1

iii) $\frac{5}{7}$ round

2) $\frac{2}{10}$

i) Label $\frac{2}{10}$

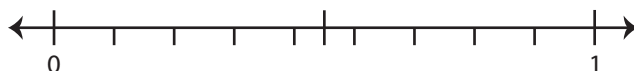


ii) Which is

iii) $\frac{2}{10}$ round

3) $\frac{8}{9}$

i) Label $\frac{8}{9}$ on the number line.



ii) Which is closer to $\frac{8}{9}$? a) $\frac{1}{2}$ b) 1 c) 0

iii) $\frac{8}{9}$ rounded to the nearest half is _____

PREVIEW

Gain complete access to the largest
collection of worksheets in all subjects!

Members, please
log in to
download this
worksheet.

Not a member?
Please sign up to
gain complete
access.

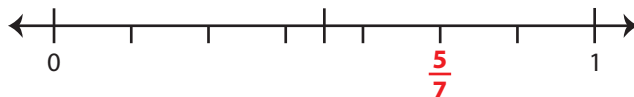
www.mathworksheets4kids.com

Rounding Proper Fraction: Number Line

Round each fraction to the nearest half using number line.

1) $\frac{5}{7}$

i) Label $\frac{5}{7}$ on the number line.



ii) Which is closer to $\frac{5}{7}$? a) 0 b) 1 c) $\frac{1}{2}$

iii) $\frac{5}{7}$ round

2) $\frac{2}{10}$

i) Label $\frac{2}{10}$

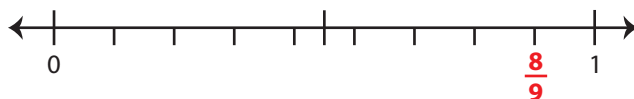


ii) Which is

iii) $\frac{2}{10}$ round

3) $\frac{8}{9}$

i) Label $\frac{8}{9}$ on the number line.



ii) Which is closer to $\frac{8}{9}$? a) $\frac{1}{2}$ b) 1 c) 0

iii) $\frac{8}{9}$ rounded to the nearest half is 1

PREVIEW

Gain complete access to the largest
collection of worksheets in all subjects!

Members, please
log in to
download this
worksheet.

Not a member?
Please sign up to
gain complete
access.

www.mathworksheets4kids.com