



Name : \_\_\_\_\_


Level 2: S3

## Match Kittens to Cats

Round the numbers on the kittens to the nearest hundred and help them to find their mom.




**PREVIEW**  
Gain complete access to the largest collection of worksheets in all subjects!




Members, please log in to download this worksheet.

Not a member? Please sign up to gain complete access.



[www.mathworksheets4kids.com](http://www.mathworksheets4kids.com)





Name : \_\_\_\_\_

## Answer Key

Level 2: S3

### Match Kittens to Cats

Round the numbers on the kittens to the nearest hundred and help them to find their mom.



**PREVIEW**

Gain complete access to the largest collection of worksheets in all subjects!

Members, please log in to download this worksheet.

Not a member? Please sign up to gain complete access.

[www.mathworksheets4kids.com](http://www.mathworksheets4kids.com)

