

Rounding: Cost of the Items

Sheet 1

Round the cost of each item to the nearest dollar.

1)



2)



3)



4)



5)



6)



Round the cost of each item to the nearest ten dollars.


1)



2)




3)



4)



5)



6)



Answer Key**Rounding: Cost of the Items**

Sheet 1

Round the cost of each item to the nearest dollar.

1)

\$23

2)

\$9

3)

\$38

4)

\$4

5)

\$58

6)

\$5

Round the cost of each item to the nearest ten dollars.


1)

\$220

2)

\$30


3)

\$530

4)

\$80

5)

\$400

6)

\$70