

Rounding: Nearest Hundred Dollars

Sheet 1

Round each amount to the nearest hundred dollars.

1) \$1,532.85 _____

2) \$810.14 _____

3) \$241.93 _____

4) \$4,158.48 _____

5) \$5,876.09 _____

6) \$1,974.57 _____

7) \$9,963.46 _____

8) \$435.22 _____


9) \$7,206.10 _____

10) \$2,147.39 _____


11) \$361.46 _____

12) \$612.5 _____

- 13) The resale value of a car is \$9,096.12. Round the cost of the car to the nearest hundred dollars.



- 14) Mathew's expenses for a month is \$785.06. Round his monthly expenses to the nearest hundred dollars.



Rounding: Nearest Hundred Dollars

Sheet 1

Round each amount to the nearest hundred dollars.

1) \$1,532.85 \$1,500

2) \$810.14 \$800

3) \$241.93 \$200

4) \$4,158.48 \$4,200

5) \$5,876.09 \$5,900

6) \$1,974.57 \$2,000

7) \$9,963.46 \$10,000

8) \$435.22 \$400


9) \$7,206.10 \$7,200

10) \$2,147.39 \$2,100

11) \$361.46 \$400

12) \$612.5 \$600

- 13) The resale value of a car is \$9,096.12. Round the cost of the car to the nearest hundred dollars.

\$9,100

- 14) Mathew's expenses for a month is \$785.06. Round his monthly expenses to the nearest hundred dollars.

\$800