

**Rounding: Nearest Dollar**

Round each amount to the nearest dollar.

1) \$74.16 \_\_\_\_\_

2) \$26.05 \_\_\_\_\_

3) \$9.83 \_\_\_\_\_

4) \$4.39 \_\_\_\_\_

5) \$69.27 \_\_\_\_\_

7) \$8.51 \_\_\_\_\_

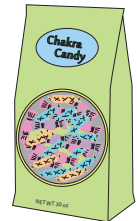
9) \$5.78 \_\_\_\_\_

11) \$20.22 \_\_\_\_\_


13) A pack of candies  
to the nearest dollar.

\_\_\_\_\_

the pack of candies



14) Kenny purchased a watch for \$65.82 to gift his mother. Round the cost of the watch to the nearest dollar.



**Rounding: Nearest Dollar**

Round each amount to the nearest dollar.

1) \$74.16     \$74

2) \$26.05     \$26

3) \$9.83     \$10

4) \$4.39     \$4

5) \$69.27     \$69

6) \$1.00     \$1

7) \$8.51     \$9

8) \$37.00     \$37

9) \$5.78     \$6

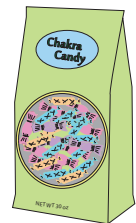
10) \$95.00     \$95

11) \$20.22     \$20


12) \$53.00     \$53

13) A pack of candies  
to the nearest dollar.\$11

A pack of candies



14) Kenny purchased a watch for \$65.82 to gift his mother. Round the cost of the watch to the nearest dollar.

\$66

**PREVIEW**

Gain complete access to the largest collection of worksheets in all subjects!

Members, please log in to download this worksheet.

Not a member? Please sign up to gain complete access.

[www.mathworksheets4kids.com](http://www.mathworksheets4kids.com)