

Name : _____

Rounding: Nearest Ten Dollars

Sheet 1

Round each amount to the nearest ten dollars.

1) \$816.73 _____

2) \$43.54 _____

3) \$334.40 _____

4) \$165.05 _____

5) \$299.08 _____

6) \$92.68 _____

7) \$61.71 _____

8) \$103.75 _____


9) \$357.96 _____

10) \$84.36 _____


11) \$73.45 _____

12) \$509.12 _____

- 13) Wesley bought a laptop for \$567.93. Round the cost of the laptop to the nearest ten dollars.



- 14) The cost of a foam pillow is \$39.85. Round the foam pillow's cost to the nearest ten dollars.



Name : _____

Answer Key

Rounding: Nearest Ten Dollars

Sheet 1

Round each amount to the nearest ten dollars.

1) \$816.73 \$820

2) \$43.54 \$40

3) \$334.40 \$330

4) \$165.05 \$170

5) \$299.08 \$300

6) \$92.68 \$90

7) \$61.71 \$60

8) \$103.75 \$100

9) \$357.96 \$360


10) \$84.36 \$80

11) \$73.45 \$70

12) \$509.12 \$510

- 13) Wesley bought a laptop for \$567.93. Round the cost of the laptop to the nearest ten dollars.

\$570



- 14) The cost of a foam pillow is \$39.85. Round the foam pillow's cost to the nearest ten dollars.

\$40

