

Name : _____

Rounding: Nearest Hundred

Sheet 1

Round each number to the nearest hundred.

1) 7,438 _____

2) 842 _____

3) 596 _____

4) 3,003 _____

5) 1,915 _____

7) 385 _____

9) 9,027 _____

11) 178 _____

13) Kevin has a _____ member to the nearest hundred.

14) Sara bought a pack of 650 straight pins. Round the number to the nearest hundred.

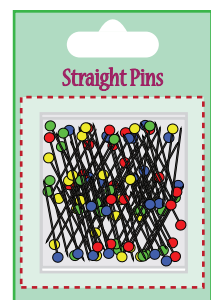

PREVIEW

Gain complete access to the largest collection of worksheets in all subjects!

Members, please log in to download this worksheet.

Not a member? Please sign up to gain complete access.

www.mathworksheets4kids.com



Rounding: Nearest Hundred

Round each number to the nearest hundred.

1) 7,438 7,400

2) 842 800

3) 596 600

4) 3,003 3,000

5) 1,915 1,900

6) 472 500

7) 385 400

8) 6,300 6,300

9) 9,027 9,000

10) 300 300


11) 178 200

12) 8,100 8,100

13) Kevin has a number to the nearest hundred. Round the number to the nearest hundred.

1,000

number to the

www.mathworksheets4kids.com

14) Sara bought a pack of 650 straight pins. Round the number to the nearest hundred.

700