

Rounding: Nearest Hundred

Round each number to the nearest hundred.

1) 8,263 _____

2) 402 _____

3) 571 _____

4) 1,231 _____


5) 2,116 _____

7) 985 _____


9) 6,720 _____

11) 854 _____

13) Mary has 11 hundred. _____ to the nearest



14) 3,698 passengers commute by train in a day. Round the number to the nearest hundred. _____



PREVIEW

Gain complete access to the largest collection of worksheets in all subjects!

Members, please log in to download this worksheet.

Not a member? Please sign up to gain complete access.

www.mathworksheets4kids.com

Rounding: Nearest Hundred

Round each number to the nearest hundred.

1) 8,263 8,300

2) 402 400

3) 571 600

4) 1,231 1,200

5) 2,116 2,100

6) 738 800

7) 985 1,000

8) 4,600 4,600

9) 6,720 6,700


10) 300 300

11) 854 900


12) 7,500 7,500

13) Mary has 11 hundred.
100

Round 1100 to the nearest hundred.



14) 3,698 passengers commute by train in a day. Round the number to the nearest hundred.
3,700



PREVIEW

Gain complete access to the largest collection of worksheets in all subjects!

Members, please log in to download this worksheet.

Not a member? Please sign up to gain complete access.

www.mathworksheets4kids.com