

Name : \_\_\_\_\_

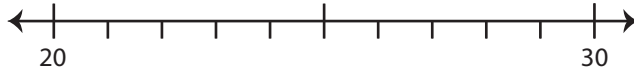
2-Digit: S1

## Rounding: Number Line

Round each number to the nearest ten using number line.

1) 23

i) Label 23 on the number line.



ii) Which is closer to 23? a) 20 b) 30

iii) 23 rounded to the nearest ten is \_\_\_\_\_

2) 78

i) Label 78



ii) Which is

iii) 78 round

3) 44

i) Label 44

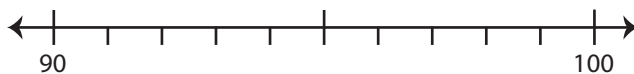


ii) Which is

iii) 44 round

4) 96

i) Label 96 on the number line.



ii) Which is closer to 96? a) 90 b) 100

iii) 96 rounded to the nearest ten is \_\_\_\_\_

# PREVIEW

Gain complete access to the largest  
collection of worksheets in all subjects!

Members, please  
log in to  
download this  
worksheet.

Not a member?  
Please sign up to  
gain complete  
access.

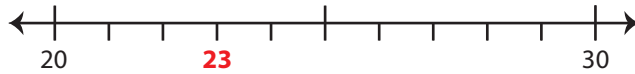
www.mathworksheets4kids.com

**Rounding: Number Line**

Round each number to the nearest ten using number line.

1) 23

i) Label 23 on the number line.



ii) Which is closer to 23?  a) 20      b) 30

iii) 23 rounded to the nearest ten is 20

2) 78

i) Label 78



ii) Which is

iii) 78 round

3) 44

i) Label 44

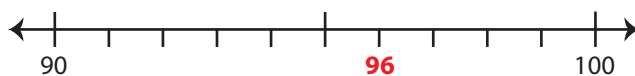


ii) Which is

iii) 44 round

4) 96

i) Label 96 on the number line.



ii) Which is closer to 96?      a) 90       b) 100

iii) 96 rounded to the nearest ten is 100

# PREVIEW

Gain complete access to the largest  
collection of worksheets in all subjects!

Members, please  
log in to  
download this  
worksheet.

Not a member?  
Please sign up to  
gain complete  
access.

www.mathworksheets4kids.com