

Name : \_\_\_\_\_

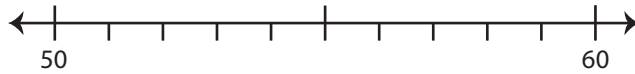
2-Digit: S2

## Rounding: Number Line

Round each number to the nearest ten using number line.

1) 59

i) Label 59 on the number line.



ii) Which is closer to 59? a) 60 b) 50

iii) 59 rounded to the nearest ten is \_\_\_\_\_

2) 82

i) Label 82



ii) Which is

iii) 82 round

3) 37

i) Label 37

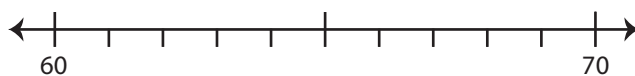


ii) Which is

iii) 37 round

4) 61

i) Label 61 on the number line.



ii) Which is closer to 61? a) 70 b) 60

iii) 61 rounded to the nearest ten is \_\_\_\_\_

# PREVIEW

Gain complete access to the largest  
collection of worksheets in all subjects!

Members, please  
log in to  
download this  
worksheet.

Not a member?  
Please sign up to  
gain complete  
access.

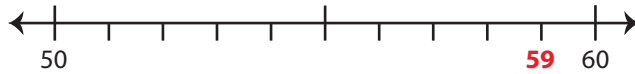
www.mathworksheets4kids.com

**Rounding: Number Line**

Round each number to the nearest ten using number line.

1) 59

i) Label 59 on the number line.



ii) Which is closer to 59?  a) 60      b) 50

iii) 59 rounded to the nearest ten is 60

2) 82

i) Label 82



ii) Which is

iii) 82 round

3) 37

i) Label 37

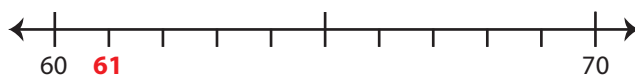


ii) Which is

iii) 37 round

4) 61

i) Label 61 on the number line.



ii) Which is closer to 61?      a) 70       b) 60

iii) 61 rounded to the nearest ten is 60

# PREVIEW

Gain complete access to the largest collection of worksheets in all subjects!

Members, please log in to download this worksheet.

Not a member? Please sign up to gain complete access.

www.mathworksheets4kids.com