

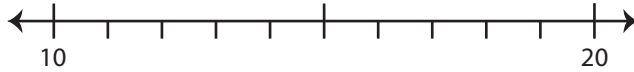
Name : _____

Rounding: Number Line

Round each number to the nearest ten using number line.

1) 12

i) Label 12 on the number line.



ii) Which is closer to 12? a) 20 b) 10

iii) 12 rounded to the nearest ten is _____

2) 64

i) Label 64



ii) Which is

iii) 64 round

3) 99

i) Label 99

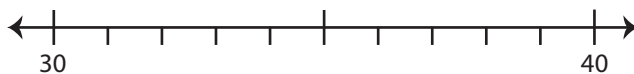


ii) Which is

iii) 99 round

4) 38

i) Label 38 on the number line.



ii) Which is closer to 38? a) 40 b) 30

iii) 38 rounded to the nearest ten is _____

PREVIEW

Gain complete access to the largest collection of worksheets in all subjects!

Members, please log in to download this worksheet.

Not a member? Please sign up to gain complete access.

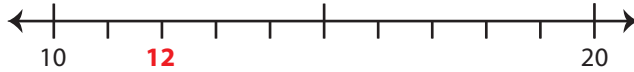
www.mathworksheets4kids.com

Rounding: Number Line

Round each number to the nearest ten using number line.

1) 12

i) Label 12 on the number line.



ii) Which is closer to 12? a) 20 b) 10

iii) 12 rounded to the nearest ten is 10

2) 64

i) Label 64



ii) Which is

iii) 64 round

3) 99

i) Label 99

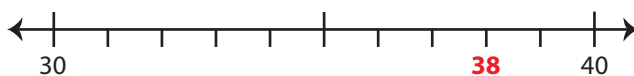


ii) Which is

iii) 99 round

4) 38

i) Label 38 on the number line.



ii) Which is closer to 38? a) 40 b) 30

iii) 38 rounded to the nearest ten is 40

PREVIEW

Gain complete access to the largest
collection of worksheets in all subjects!

Members, please
log in to
download this
worksheet.

Not a member?
Please sign up to
gain complete
access.

www.mathworksheets4kids.com