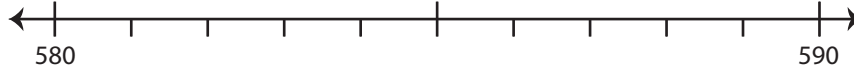


Rounding: Number Line

Round each number to the nearest ten using number line.

1) 583

i) Label 583 on the number line.



ii) Which is closer to 583? a) 590 b) 580

iii) 583 rounded to the nearest ten is _____

2) 709

i) Label 709 on the number line.



ii) Which is closer to 709? a) 700 b) 710

iii) 709 rounded to the nearest ten is _____

3) 142

i) Label 142 on the number line.

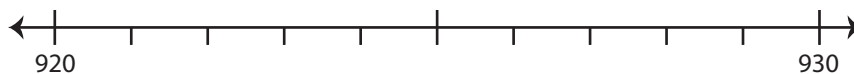


ii) Which is closer to 142? a) 140 b) 150

iii) 142 rounded to the nearest ten is _____

4) 926

i) Label 926 on the number line.



ii) Which is closer to 926? a) 930 b) 920

iii) 926 rounded to the nearest ten is _____

PREVIEW

Gain complete access to the largest collection of worksheets in all subjects!

Members, please log in to download this worksheet.

Not a member? Please sign up to gain complete access.

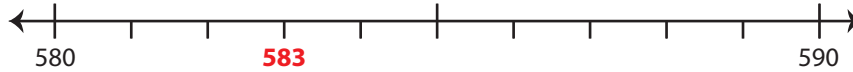
www.mathworksheets4kids.com

Rounding: Number Line

Round each number to the nearest ten using number line.

1) 583

i) Label 583 on the number line.



ii) Which is closer to 583? a) 590 b) 580

iii) 583 rounded to the nearest ten is 580

2) 709

i) Label 70



ii) Which is

iii) 709 roun

3) 142

i) Label 14

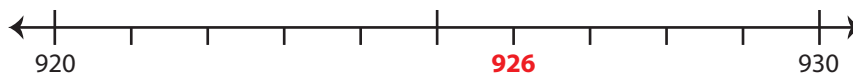


ii) Which is

iii) 142 roun

4) 926

i) Label 926 on the number line.



ii) Which is closer to 926? a) 930 b) 920

iii) 926 rounded to the nearest ten is 930

PREVIEW

Gain complete access to the largest collection of worksheets in all subjects!

Members, please log in to download this worksheet.

Not a member? Please sign up to gain complete access.

www.mathworksheets4kids.com