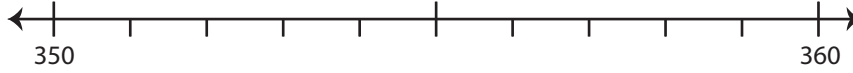


Rounding: Number Line

Round each number to the nearest ten using number line.

1) 357

i) Label 357 on the number line.



ii) Which is closer to 357? a) 360 b) 350

iii) 357 rounded to the nearest ten is _____

2) 871

i) Label 871 on the number line.



ii) Which is closer to 871?

iii) 871 rounded to the nearest ten is _____

3) 698

i) Label 698 on the number line.



ii) Which is closer to 698?

iii) 698 rounded to the nearest ten is _____

PREVIEW

Gain complete access to the largest collection of worksheets in all subjects!

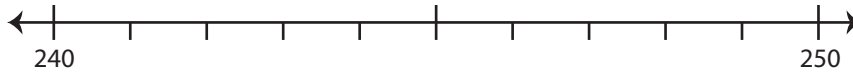
Members, please log in to download this worksheet.

Not a member? Please sign up to gain complete access.

www.mathworksheets4kids.com

4) 244

i) Label 244 on the number line.



ii) Which is closer to 244? a) 250 b) 240

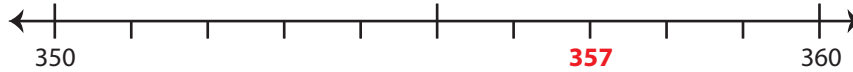
iii) 244 rounded to the nearest ten is _____

Rounding: Number Line

Round each number to the nearest ten using number line.

1) 357

i) Label 357 on the number line.



ii) Which is closer to 357? a) 360 b) 350

iii) 357 rounded to the nearest ten is 360

2) 871

i) Label 871 on the number line.



ii) Which is closer to 871?

iii) 871 rounded to the nearest ten is

3) 698

i) Label 698 on the number line.

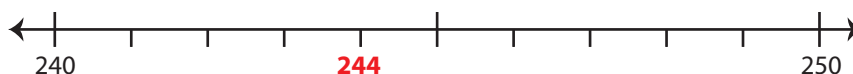


ii) Which is closer to 698?

iii) 698 rounded to the nearest ten is

4) 244

i) Label 244 on the number line.



ii) Which is closer to 244? a) 250 b) 240

iii) 244 rounded to the nearest ten is 240

PREVIEW

Gain complete access to the largest collection of worksheets in all subjects!

Members, please log in to download this worksheet.

Not a member? Please sign up to gain complete access.

www.mathworksheets4kids.com