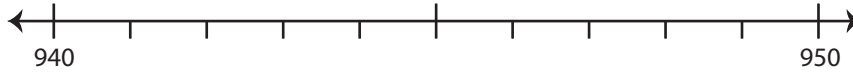


Rounding: Number Line

Round each number to the nearest ten using number line.

1) 946

i) Label 946 on the number line.



ii) Which is closer to 946? a) 940 b) 950

iii) 946 rounded to the nearest ten is _____

2) 118

i) Label 118 on the number line.



ii) Which is closer to 118?

iii) 118 rounded to the nearest ten is _____

3) 433

i) Label 433 on the number line.

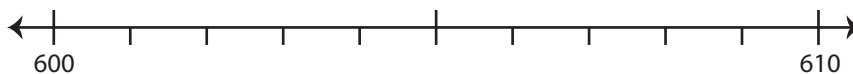


ii) Which is closer to 433?

iii) 433 rounded to the nearest ten is _____

4) 601

i) Label 601 on the number line.



ii) Which is closer to 601? a) 610 b) 600

iii) 601 rounded to the nearest ten is _____

PREVIEW

Gain complete access to the largest collection of worksheets in all subjects!

Members, please log in to download this worksheet.

Not a member? Please sign up to gain complete access.

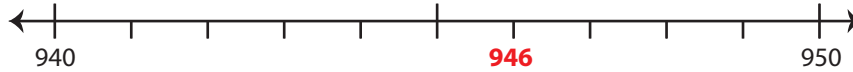
www.mathworksheets4kids.com

Rounding: Number Line

Round each number to the nearest ten using number line.

1) 946

i) Label 946 on the number line.



ii) Which is closer to 946? a) 940 ~~b) 950~~

iii) 946 rounded to the nearest ten is 950

2) 118

i) Label 118 on the number line.



ii) Which is closer to 118?

iii) 118 rounded to the nearest ten is 120

3) 433

i) Label 433 on the number line.

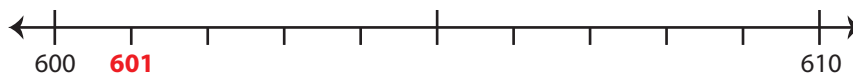


ii) Which is closer to 433?

iii) 433 rounded to the nearest ten is 430

4) 601

i) Label 601 on the number line.



ii) Which is closer to 601? a) 610 ~~b) 600~~

iii) 601 rounded to the nearest ten is 600

PREVIEW

Gain complete access to the largest collection of worksheets in all subjects!

Members, please log in to download this worksheet.

Not a member? Please sign up to gain complete access.

www.mathworksheets4kids.com