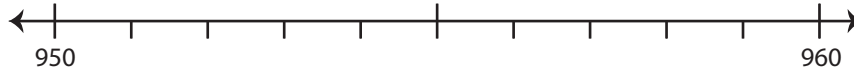


## Rounding: Number Line

Round each number to the nearest ten using number line.

1) 953

i) Label 953 on the number line.



ii) Which is closer to 953? a) 950 b) 960

iii) 953 rounded to the nearest ten is \_\_\_\_\_

2) 28

i) Label 28



ii) Which is

iii) 28 round

3) 607

i) Label 60

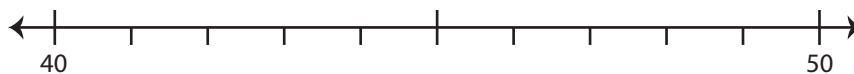


ii) Which is

iii) 607 round

4) 41

i) Label 41 on the number line.



ii) Which is closer to 41? a) 40 b) 50

iii) 41 rounded to the nearest ten is \_\_\_\_\_

# PREVIEW

Gain complete access to the largest  
collection of worksheets in all subjects!

Members, please  
log in to  
download this  
worksheet.

Not a member?  
Please sign up to  
gain complete  
access.

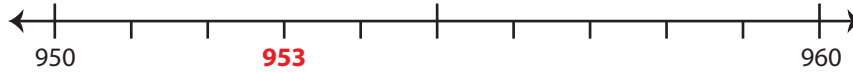
www.mathworksheets4kids.com

**Rounding: Number Line**

Round each number to the nearest ten using number line.

1) 953

i) Label 953 on the number line.



ii) Which is closer to 953?  a) 950    b) 960

iii) 953 rounded to the nearest ten is 950

2) 28

i) Label 28



ii) Which is

iii) 28 round

3) 607

i) Label 60

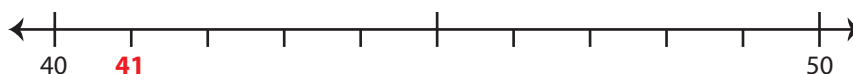


ii) Which is

iii) 607 round

4) 41

i) Label 41 on the number line.



ii) Which is closer to 41?  a) 40    b) 50

iii) 41 rounded to the nearest ten is 40

# PREVIEW

Gain complete access to the largest  
collection of worksheets in all subjects!

Members, please  
log in to  
download this  
worksheet.

Not a member?  
Please sign up to  
gain complete  
access.

www.mathworksheets4kids.com