

Name : _____

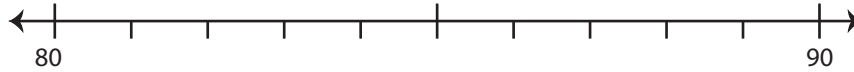
2&3-Digit: S2

Rounding: Number Line

Round each number to the nearest ten using number line.

1) 82

i) Label 82 on the number line.



ii) Which is closer to 82? a) 90 b) 80

iii) 82 rounded to the nearest ten is _____

2) 576

i) Label 57



ii) Which is

iii) 576 round

3) 49

i) Label 49

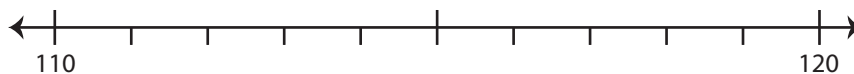


ii) Which is

iii) 49 round

4) 114

i) Label 114 on the number line.



ii) Which is closer to 114? a) 110 b) 120

iii) 114 rounded to the nearest ten is _____

PREVIEW

Gain complete access to the largest collection of worksheets in all subjects!

Members, please log in to download this worksheet.

Not a member? Please sign up to gain complete access.

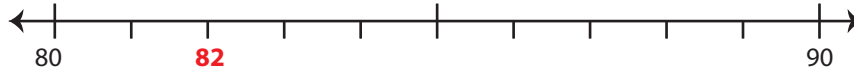
www.mathworksheets4kids.com

Rounding: Number Line

Round each number to the nearest ten using number line.

1) 82

i) Label 82 on the number line.



ii) Which is closer to 82? a) 90 b) 80

iii) 82 rounded to the nearest ten is 80

2) 576

i) Label 576 on the number line.



ii) Which is closer to 576? a) 570 b) 580

iii) 576 rounded to the nearest ten is 580

3) 49

i) Label 49 on the number line.

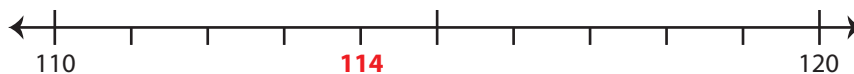


ii) Which is closer to 49? a) 40 b) 50

iii) 49 rounded to the nearest ten is 50

4) 114

i) Label 114 on the number line.



ii) Which is closer to 114? a) 110 b) 120

iii) 114 rounded to the nearest ten is 110

PREVIEW

Gain complete access to the largest collection of worksheets in all subjects!

Members, please log in to download this worksheet.

Not a member? Please sign up to gain complete access.

www.mathworksheets4kids.com