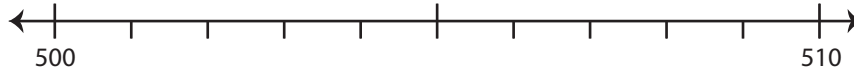


## Rounding: Number Line

Round each number to the nearest ten using number line.

1) 504

i) Label 504 on the number line.



ii) Which is closer to 504? a) 500 b) 510

iii) 504 rounded to the nearest ten is \_\_\_\_\_

2) 783

i) Label 783 on the number line.



ii) Which is closer to 783?

iii) 783 rounded to the nearest ten is \_\_\_\_\_

3) 97

i) Label 97 on the number line.

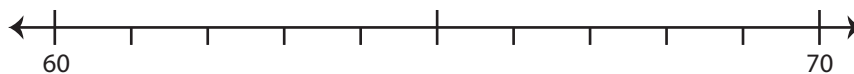


ii) Which is closer to 97?

iii) 97 rounded to the nearest ten is \_\_\_\_\_

4) 68

i) Label 68 on the number line.



ii) Which is closer to 68? a) 60 b) 70

iii) 68 rounded to the nearest ten is \_\_\_\_\_

# PREVIEW

Gain complete access to the largest collection of worksheets in all subjects!

Members, please log in to download this worksheet.

Not a member? Please sign up to gain complete access.

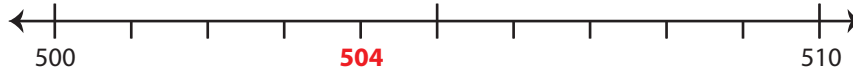
www.mathworksheets4kids.com

**Rounding: Number Line**

Round each number to the nearest ten using number line.

1) 504

i) Label 504 on the number line.



ii) Which is closer to 504?  a) 500    b) 510

iii) 504 rounded to the nearest ten is 500

2) 783

i) Label 783 on the number line.



ii) Which is closer to 783?

iii) 783 rounded to the nearest ten is

3) 97

i) Label 97 on the number line.

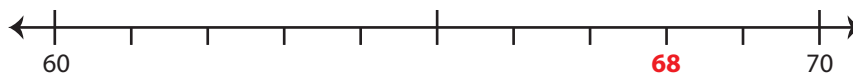


ii) Which is closer to 97?

iii) 97 rounded to the nearest ten is

4) 68

i) Label 68 on the number line.



ii) Which is closer to 68?    a) 60     b) 70

iii) 68 rounded to the nearest ten is 70

# PREVIEW

Gain complete access to the largest collection of worksheets in all subjects!

Members, please log in to download this worksheet.

Not a member? Please sign up to gain complete access.

www.mathworksheets4kids.com