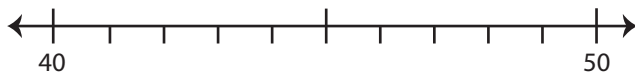


Round Up/Round Down

A) Round each number to the nearest ten using number line.

1) 42

i) Label 42 on the number line.

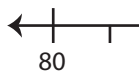


ii) 42 rounded to the nearest ten is _____

iii) Did you round up or round down? Explain.

2) 89

i) Label 89 on



ii) 89 rounded

iii) Did you rou

PREVIEW

Gain complete access to the largest
collection of worksheets in all subjects!

Members, please
log in to
download this
worksheet.

Not a member?
Please sign up to
gain complete
access.

www.mathworksheets4kids.com

B)

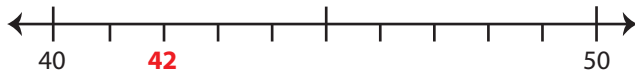
Q.No	Number		
1)	31		
2)	68		
3)	92		
4)	73		
5)	15		

Round Up/Round Down

A) Round each number to the nearest ten using number line.

1) 42

i) Label 42 on the number line.

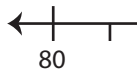
ii) 42 rounded to the nearest ten is 40

iii) Did you round up or round down? Explain.

Rounded

2) 89

i) Label 89 on



ii) 89 rounded

iii) Did you round

Rounded**PREVIEW**

Gain complete access to the largest collection of worksheets in all subjects!

Members, please log in to download this worksheet.

Not a member? Please sign up to gain complete access.

www.mathworksheets4kids.com

B)

Q.No	Number	Rounded to	Direction
1)	31	30	rounded down
2)	68	70	rounded up
3)	92	90	rounded down
4)	73	70	rounded down
5)	15	20	rounded up