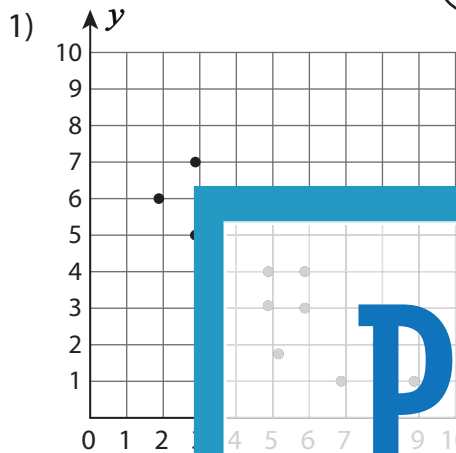


Making Predictions



i) If x is 3, what y -value does the scatter plot suggest?

☐ 2

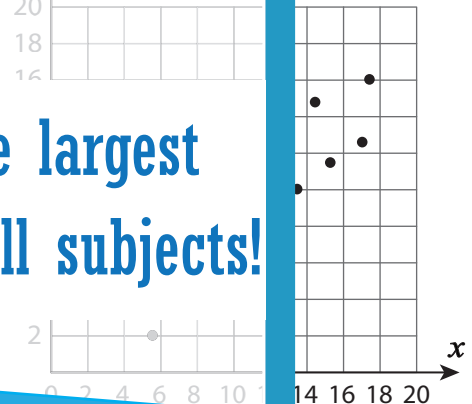
☐ 6

ii) Based on the graph, which x -value most likely matches

PREVIEW

2)

i) Using the trend in the data, what would you predict y to be when x is 14?

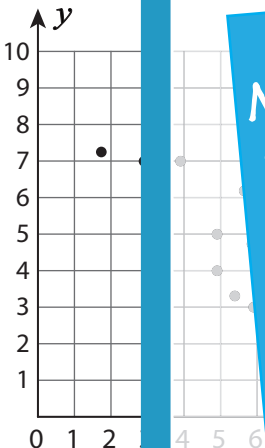


ii) Looking at the trend, what would you predict x to be when y is 20?

☐ 14

☐ 20

3)



Members, please
log in to
download this
worksheet.

Not a member?
Please sign up to
gain complete
access.

4)

i) Based on the trend in the data, what would you predict x to be when y is 14?

☐ 8

☐ 16

www.mathworksheets4kids.com

ii) Using the trend in the data, what would you predict x to be when y is 14?

☐ 2

☐ 14

