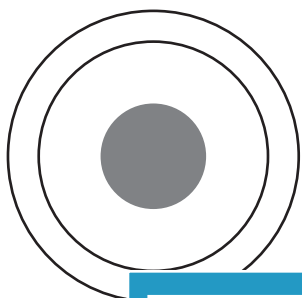


Name : _____

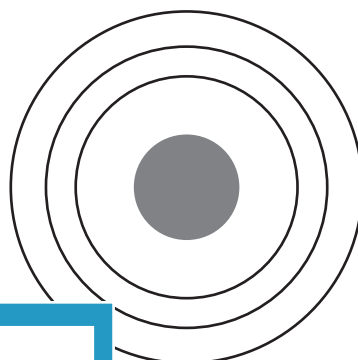
Bohr Model

A) Draw a Bohr model for each element.


1) nitrogen



2) sulfur



3) chlorine



PREVIEW

Gain complete access to the largest collection of worksheets in all subjects!

Members, please log in to download this worksheet.

Not a member? Please sign up to gain complete access.

www.mathworksheets4kids.com

B) Identify the element.

_____ model.

1)

