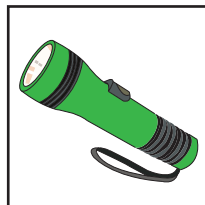



Name : _____

Mains power vs Batteries

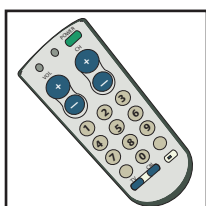
Look at the pictures and label the power sources as 'mains' or 'batteries'.

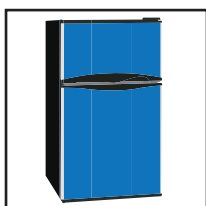


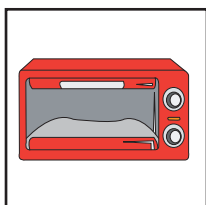




















PREVIEW

Access the largest collection of worksheets for just **\$19.95** per year!

Members, please log in to download this worksheet.

Log in

Not a member? Please sign up to gain complete access.

Sign up

www.mathworksheets4kids.com

Name : _____

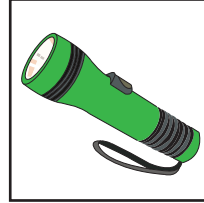
Answer key

Mains power vs Batteries


Look at the pictures and label the power sources as 'mains' or 'batteries'.




mains




batteries



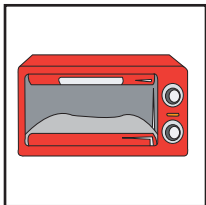
mains



mains




batteries



mains



batteries



batteries



mains

PREVIEW

Access the largest collection of worksheets for just **\$19.95** per year!

Members, please log in to download this worksheet.

Not a member? Please sign up to gain complete access.

www.mathworksheets4kids.com